



Please write clearly in block capitals.

Centre number

Candidate number

Surname _____

Forename(s) _____

Candidate signature _____

GCSE MATHEMATICS

F


Foundation Tier Paper 3 Calculator

Wednesday 8 November 2017 Morning Time allowed: 1 hour 30 minutes

Materials

For this paper you must have:

- a calculator
- mathematical instruments.



Instructions

- Use black ink or black ball-point pen. Draw diagrams in pencil.
- Answer **all** questions.
- You must answer the questions in the spaces provided. Do not write outside the box around each page or on blank pages.
- Do all rough work in this book. Cross through any work you do not want to be marked.

Information

- The marks for questions are shown in brackets.
- The maximum mark for this paper is 80.
- You may ask for more answer paper, graph paper and tracing paper. These must be tagged securely to this answer book.

For Examiner's Use	
Pages	Mark
2–3	
4–5	
6–7	
8–9	
10–11	
12–13	
14–15	
16–17	
18–19	
20–21	
22–23	
24–25	
TOTAL	

Advice

- In all calculations, show clearly how you work out your answer.



N 0 V 1 7 8 3 0 0 3 F 0 1

Answer **all** questions in the spaces provided

1 Circle the cube number.

[1 mark]

100

1000

10 000

100 000

2 A fair ordinary dice is thrown once.

Circle the probability of getting a 2 or a 3

[1 mark]

$\frac{1}{6}$

$\frac{2}{6}$

$\frac{3}{6}$

$\frac{5}{6}$

3 Circle the decimal that is greater than $\frac{1}{5}$ and less than $\frac{1}{4}$

[1 mark]

0.152

0.200

0.215

0.251



4 What is a **litre** a unit of?
Circle your answer.

[1 mark]

area

density

mass

capacity

5 2.5 kg of carrots cost £1.70
Work out the cost of 3.25 kg of carrots.

[3 marks]

Answer £ _____

Turn over for the next question



6 Gina makes a sandwich using

bread (B) or a roll (R)

and

ham (H) or cheese (C)

and

salad (S) or pickle (P)

6 (a) List **all** the possible types of sandwich Gina could make.
One has been done for you.

[2 marks]

B H S

6 (b) What **fraction** of the possible types of sandwich have cheese **and** pickle?

[1 mark]

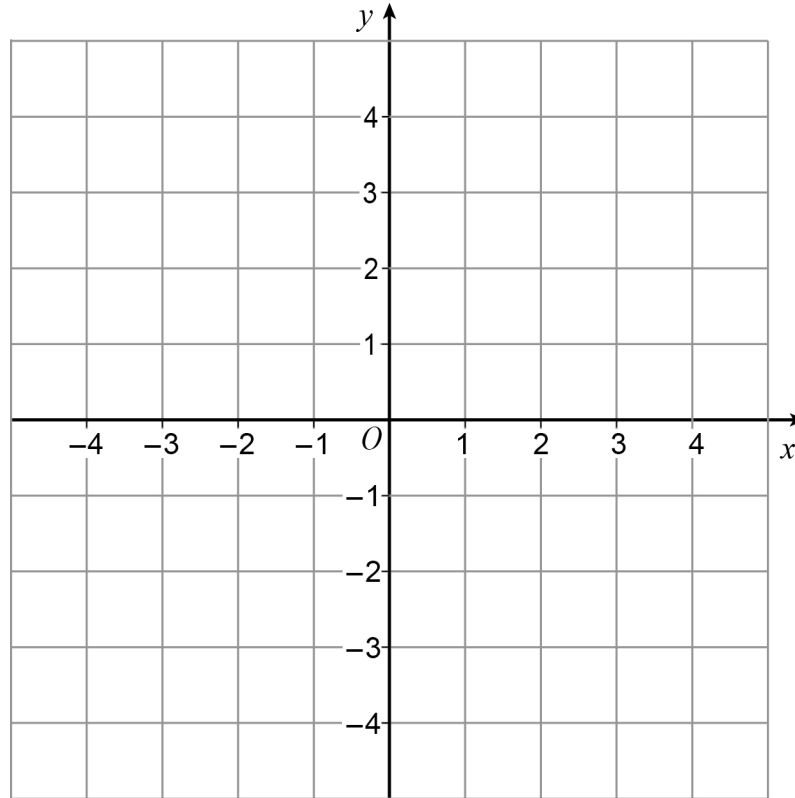
Answer _____



- 7 ABC is a right-angled triangle.
 A is the point $(-3, -2)$
 B is the point $(1, -2)$
 C is a point on the line $y = 4$

7 (a) Draw triangle ABC on the centimetre grid below.

[3 marks]



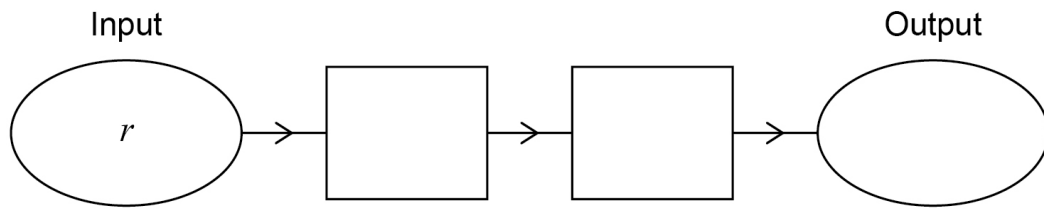
7 (b) Work out the area of triangle ABC .

[2 marks]

Answer _____ cm^2

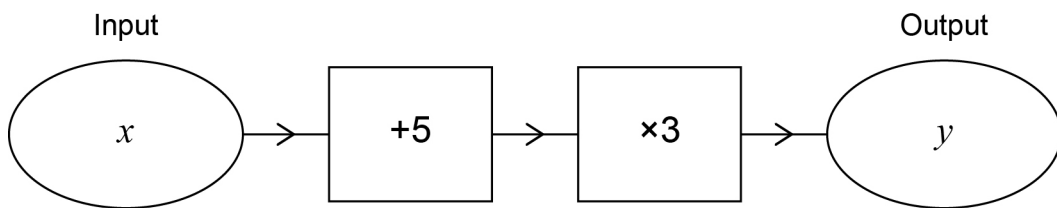


- 8 (a) Complete the number machine so that $q = 7r - 2$



[2 marks]

- 8 (b) Write down the output y in terms of x .

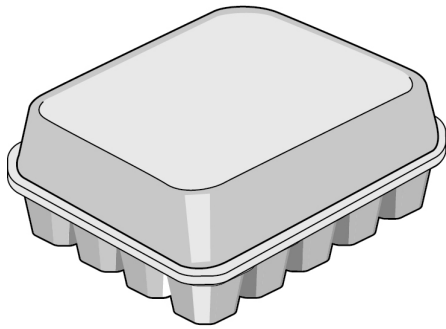


[1 mark]

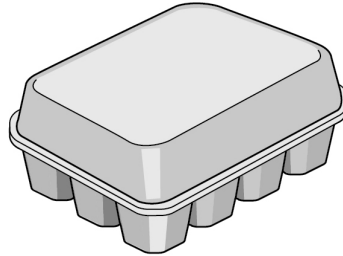
Answer _____



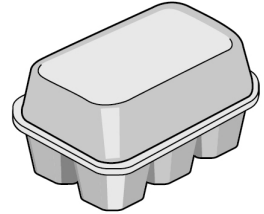
9 A farmer has 580 eggs to put into boxes.
The boxes come in three sizes.



20 eggs



12 eggs



6 eggs

He wants
at least 10 boxes of 20 eggs
at least 15 boxes of 12 eggs
at least 25 boxes of 6 eggs.

The farmer fills 54 boxes with the 580 eggs.
Show how he does this.

[5 marks]

Answer _____ boxes of 20 eggs

_____ boxes of 12 eggs

_____ boxes of 6 eggs



10

Megan says,

“If you add any three multiples of 10 the total must be
a multiple of 10
and
a multiple of 3”

Is she correct?

You **must** show your working.

[2 marks]

Answer _____



11 A fair spinner has 12 equal sections.

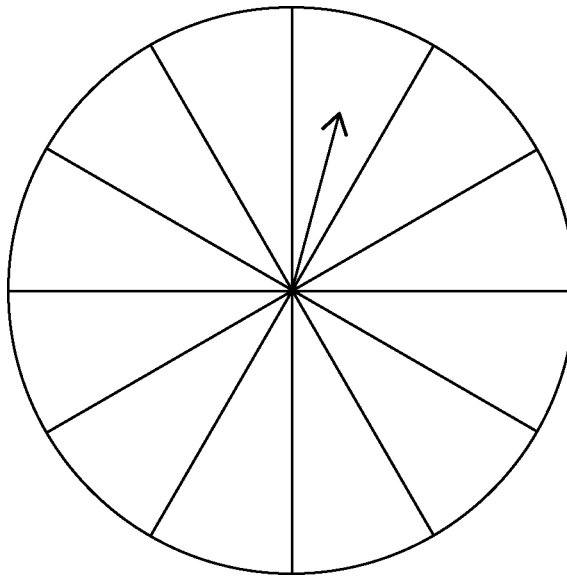
Label each section A, B, C or D so that when the arrow is spun,

the probability it lands on A is $\frac{1}{6}$

the probability it lands on B is **equal** to the probability it lands on C

the probability it lands on D is **double** the probability it lands on A.

[3 marks]



Turn over for the next question



12 $a - b = 5$

12 (a) Work out the value of $2(a - b)$

[1 mark]

Answer _____

12 (b) Work out the value of $7a - 7b$

[1 mark]

Answer _____

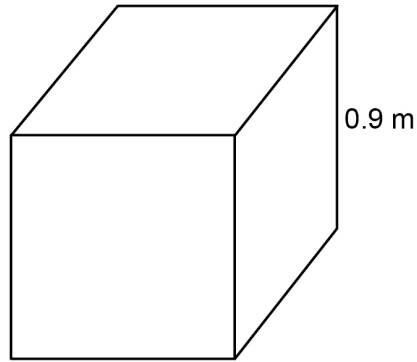
12 (c) Work out the value of $b - a$

[1 mark]

Answer _____



13 A cube has edge length 0.9 metres.



Work out the **total** surface area of the cube.
Give your answer in **square centimetres**.

[3 marks]

Answer _____ cm^2

Turn over for the next question



14 £1700 is invested for 3 years at 4% per year **simple** interest.

Work out the total interest.


[3 marks]

Answer £ _____



15 Here is a map showing two towns, *P* and *Q*.

Scale: 1 cm represents 50 km



15 (a) Work out the **actual** distance between towns *P* and *Q*.

[2 marks]

Answer _____ km

15 (b) Town *R* is 200 km due South of town *P*.

Mark *R* on the map.

[2 marks]

7

Turn over ►



16 A train has 1 first-class carriage and 6 standard carriages.

The first-class carriage has 64 seats.

$\frac{3}{8}$ are being used.

Each standard carriage has 78 seats.

$\frac{7}{13}$ in each carriage are being used.

Are **more than** half the seats on the train being used?

You **must** show your working.

[5 marks]

Answer _____



17 Circle the equation which has the solution $x = 6$

[1 mark]

$$x - 3 = \frac{x}{2}$$

$$x = \frac{3+x}{2}$$

$$3x = 36$$

$$\frac{x}{6} = 0$$

18 x is greater than 5 **and** less than or equal to 9
Circle the inequality that shows this.

[1 mark]

$$5 \leq x < 9$$

$$5 > x \geq 9$$

$$5 \leq x > 9$$

$$5 < x \leq 9$$

Turn over for the next question

Turn over ►



19 The following data comes from a large sample survey of the audience at a concert.

	Percentage	Mean age (years)	Age range (years)
Male	17%	20.3	6
Female	83%	25.7	28

Make **three** comparisons of males and females at the concert.
Use the headings given.

[3 marks]

Proportion of the audience _____

Average age _____

Spread of ages _____



20

In a tennis tournament,

98 players took part in the singles only

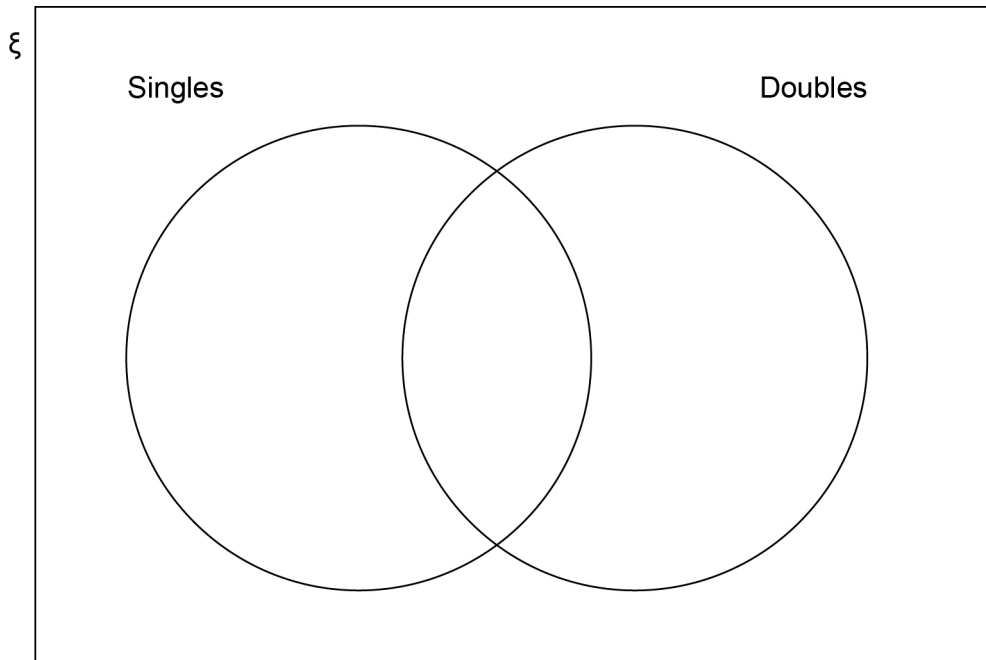
34 players took part in the doubles only

twice as many players took part in the singles as took part in the doubles.

How many players took part in both the singles **and** the doubles?

You may use the Venn diagram to help you.

[4 marks]



Answer _____

7

Turn over ►



21 The distance by road from Newport to London is 140 miles.

Tom travels by coach from Newport to London.
The coach leaves Newport at 1.30 pm

21 (a) He assumes the coach will travel at an average speed of 50 mph

Use his assumption to work out the arrival time in London.

[3 marks]

Answer _____

21 (b) In fact, the coach has a lower average speed.

How does this affect the arrival time?

[1 mark]

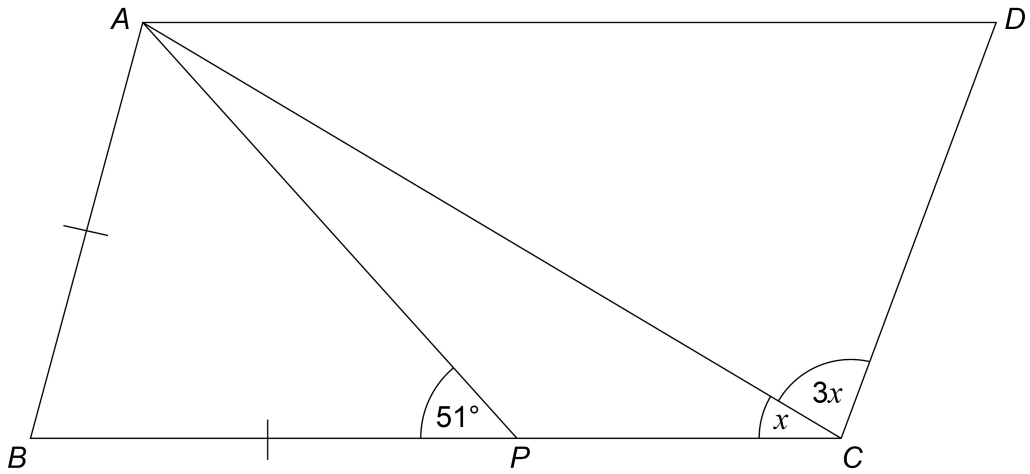


22

$ABCD$ is a parallelogram.

$AB = BP$

Not drawn accurately



Work out the size of angle x .

[4 marks]

Answer _____ degrees

Turn over for the next question



23

Show that 268 can be written as the sum of a power of 3 and a square number.

[2 marks]

Answer _____



24 y is inversely proportional to x and k is a constant.

Circle the correct equation.

[1 mark]

$$y = \frac{k}{x}$$

$$y = kx$$

$$y = \frac{x}{k}$$

$$y = x - k$$

25

$$\text{pressure} = \frac{\text{force}}{\text{area}}$$

Work out the **force** when the pressure is 24 N/m^2 and the area is 3 m^2
Circle your answer.

[1 mark]

0.125 N

8 N

27 N

72 N

Turn over for the next question

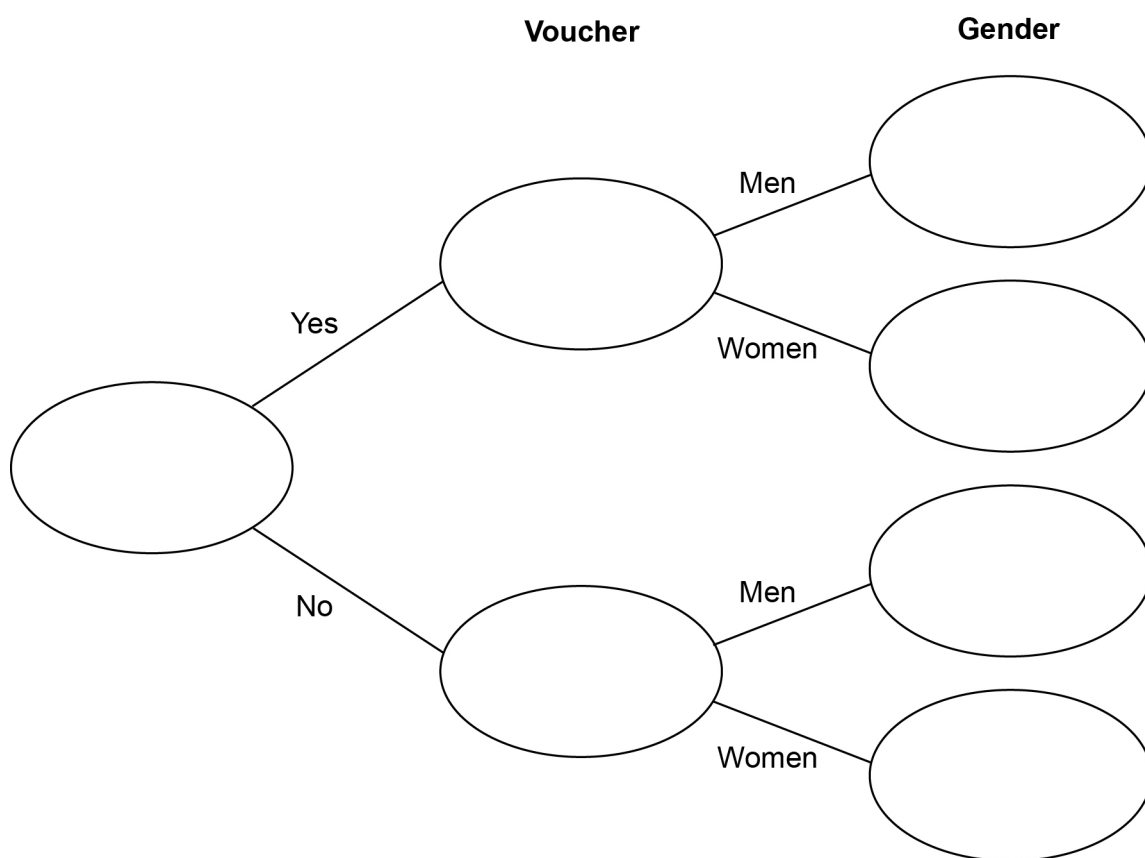
Turn over ►



- 26** 42 men and 38 women visit a restaurant.
44 of these people have a voucher.
Three times as many men as women do **not** have a voucher.

26 (a) Complete the frequency tree.

[4 marks]



26 (b) A voucher takes **15% off** the bill.
After using the voucher, the bill for a meal is £27.20
How much was the bill before using the voucher?

[3 marks]

Answer £ _____

Turn over for the next question

7

Turn over ►



27 (a) Rearrange $v = u + at$ to make t the subject of the formula.

[2 marks]

Answer _____

27 (b) Complete this table with consistent metric units.

[2 marks]

Distance	Time	Speed	Acceleration
m	s		



28

Multiply out and simplify $(x - 8)^2$

[2 marks]

Answer _____

END OF QUESTIONS

6



There are no questions printed on this page

**DO NOT WRITE ON THIS PAGE
ANSWER IN THE SPACES PROVIDED**



There are no questions printed on this page

**DO NOT WRITE ON THIS PAGE
ANSWER IN THE SPACES PROVIDED**



There are no questions printed on this page

**DO NOT WRITE ON THIS PAGE
ANSWER IN THE SPACES PROVIDED**

Copyright Information

For confidentiality purposes, from the November 2015 examination series, acknowledgements of third party copyright material will be published in a separate booklet rather than including them on the examination paper or support materials. This booklet is published after each examination series and is available for free download from www.aqa.org.uk after the live examination series.

Permission to reproduce all copyright material has been applied for. In some cases, efforts to contact copyright-holders may have been unsuccessful and AQA will be happy to rectify any omissions of acknowledgements. If you have any queries please contact the Copyright Team, AQA, Stag Hill House, Guildford, GU2 7XJ.

Copyright © 2017 AQA and its licensors. All rights reserved.

