

Please check the examination details below before entering your candidate information

Candidate surname					Other names				
Centre Number					Candidate Number				
<input type="text"/>	<input type="text"/>	<input type="text"/>	<input type="text"/>	<input type="text"/>	<input type="text"/>	<input type="text"/>	<input type="text"/>	<input type="text"/>	


Pearson Edexcel Level 1/Level 2 GCSE (9–1)

Friday 10 November 2023

Morning (Time: 1 hour 30 minutes)

Paper reference **1MA1/2F**

Mathematics
PAPER 2 (Calculator)
Foundation Tier



You must have: Ruler graduated in centimetres and millimetres, protractor, pair of compasses, pen, HB pencil, eraser, calculator, Formulae Sheet (enclosed). Tracing paper may be used.

Total Marks

Instructions

- Use **black** ink or ball-point pen.
- **Fill in the boxes** at the top of this page with your name, centre number and candidate number.
- Answer **all** questions.
- Answer the questions in the spaces provided
– *there may be more space than you need.*
- You must **show all your working**.
- Diagrams are **NOT** accurately drawn, unless otherwise indicated.
- **Calculators may be used.**
- If your calculator does not have a π button, take the value of π to be 3.142 unless the question instructs otherwise.

Information

- The total mark for this paper is 80
- The marks for **each** question are shown in brackets
– *use this as a guide as to how much time to spend on each question.*

Advice

- Read each question carefully before you start to answer it.
- Try to answer every question.
- Check your answers if you have time at the end.

Turn over ►

P69531A

©2023 Pearson Education Ltd.
Z:1/1/1/1/1/1/1/1/




Pearson

Answer ALL questions.

Write your answers in the spaces provided.

You must write down all the stages in your working.

- 1** Write down two factors of 18

..... ,

(Total for Question 1 is 1 mark)

- 2** Write 0.9 as a fraction.

.....

(Total for Question 2 is 1 mark)

- 3** Change 7 metres to centimetres.

..... centimetres

(Total for Question 3 is 1 mark)

- 4** Write down a square number that is between 10 and 50

.....

(Total for Question 4 is 1 mark)

- 5** Work out 50% of 240

.....

(Total for Question 5 is 1 mark)

DO NOT WRITE IN THIS AREA

DO NOT WRITE IN THIS AREA

DO NOT WRITE IN THIS AREA



DO NOT WRITE IN THIS AREA

DO NOT WRITE IN THIS AREA

DO NOT WRITE IN THIS AREA

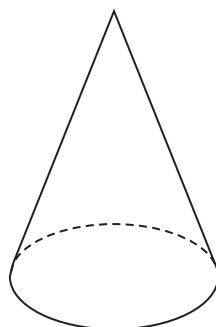
- 6 Lydia works for 4 hours.
She is paid £50

How much is Lydia paid per hour?

£.....

(Total for Question 6 is 2 marks)

- 7 Here is a 3-D shape.



- (a) Write down the name of this 3-D shape.

.....
(1)

- (b) In the space below, draw a sketch of a triangular prism.

.....
(1)

(Total for Question 7 is 2 marks)



8 Curtis needs to buy some items for his sports club.

Here are the prices.

Item	Price
Footballs	£9.50 each
Hockey sticks	£30 for 2
Cricket bats	£23 each
Tennis balls	£5 for 4

Curtis needs to buy

5 footballs
6 hockey sticks
2 cricket bats
4 tennis balls.

Curtis has £200 to spend.

Show that Curtis can buy all the items he needs.

(Total for Question 8 is 4 marks)



- 9 Harris is buying a shirt and a tie.
He has a choice of three colours of shirt and a choice of three styles of tie.

Shirt	Tie
White (W)	Plain (P)
Blue (B)	Striped (S)
Grey (G)	Checked (C)

Harris is going to choose one shirt and one tie.

List all the possible combinations Harris can choose.

.....

.....

.....

.....

(Total for Question 9 is 2 marks)

- 10 There are 24 red counters and 40 blue counters in a bag.

Write down the ratio of the number of red counters to the number of blue counters in the bag.

Give your ratio in its simplest form.

.....

(Total for Question 10 is 2 marks)



11 Rima is going to roll a fair 6-sided dice.

- (a) Choose the word that best describes the probability that the dice will land on the number 3

impossible

unlikely

evens

likely

certain

.....
(1)

- (b) Choose the word that best describes the probability that the dice will land on an odd number.

impossible

unlikely

evens

likely

certain

.....
(1)

(Total for Question 11 is 2 marks)

12 A car travels at an average speed of 37 miles per hour for 3 hours.

Work out the distance that the car travels in the 3 hours.

..... miles

(Total for Question 12 is 2 marks)

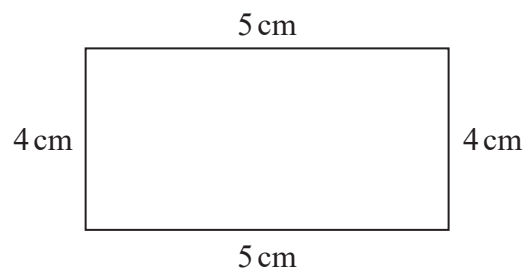


DO NOT WRITE IN THIS AREA

DO NOT WRITE IN THIS AREA

DO NOT WRITE IN THIS AREA

13 Milo is trying to find the area of this rectangle.



He writes,

“The area is 400 cm^2 because $5 \times 4 \times 5 \times 4 = 400$ ”

(a) Explain what is wrong with Milo’s method.

(1)

Anya works out the area of a shape.

Her answer is 86 cm.

(b) Explain why her answer cannot be fully correct.

(1)

(Total for Question 13 is 2 marks)



- 14** 3 kg of flour costs £4.05
5 kg of flour and 6 kg of sugar cost £11.85

Work out the cost of 2 kg of flour and 5 kg of sugar.

£.....

(Total for Question 14 is 4 marks)

DO NOT WRITE IN THIS AREA

DO NOT WRITE IN THIS AREA

DO NOT WRITE IN THIS AREA



DO NOT WRITE IN THIS AREA

DO NOT WRITE IN THIS AREA

DO NOT WRITE IN THIS AREA

15 Martha and Nabeel share £120

Martha gets 72% of the money.

She spends 30% of the money she gets.

How much money does Martha have left?

£.....

(Total for Question 15 is 3 marks)



- 16** 160 people were asked to choose their favourite type of book.
They each chose from romance or adventure or horror or thriller.

85 of these people were children.
The rest were adults.

19 of the 33 people who chose romance were children.
34 of the 76 people who chose adventure were adults.
7 adults chose thriller.

The number of children who chose thriller was the same as the number of adults who chose horror.

Work out the total number of people who chose horror.
You must show how you get your answer.

.....
(Total for Question 16 is 4 marks)



DO NOT WRITE IN THIS AREA

DO NOT WRITE IN THIS AREA

DO NOT WRITE IN THIS AREA

17 Here are the heights, in cm, of 16 sunflowers.

168	173	172	180	162	191	183	160
178	184	197	177	172	186	188	180

Show this information in a stem and leaf diagram.

Key:

(Total for Question 17 is 3 marks)



18 (a) Work out $\frac{9.8 + 6.8}{4.2 \times 2.1}$

Give your answer as a decimal.

Write down all the figures on your calculator display.

.....
(2)

(b) Write your answer to part (a) correct to 2 decimal places.

.....
(1)

(Total for Question 18 is 3 marks)

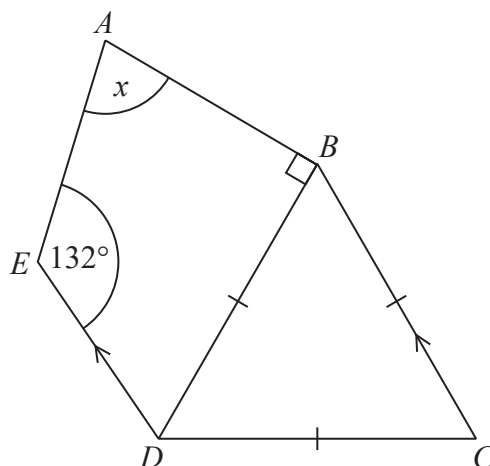
DO NOT WRITE IN THIS AREA

DO NOT WRITE IN THIS AREA

DO NOT WRITE IN THIS AREA



19 The diagram shows a quadrilateral $ABDE$ and an equilateral triangle BCD .



CB is parallel to DE .

Angle $AED = 132^\circ$

Work out the size of the angle marked x .

You must give a reason for each stage of your working.

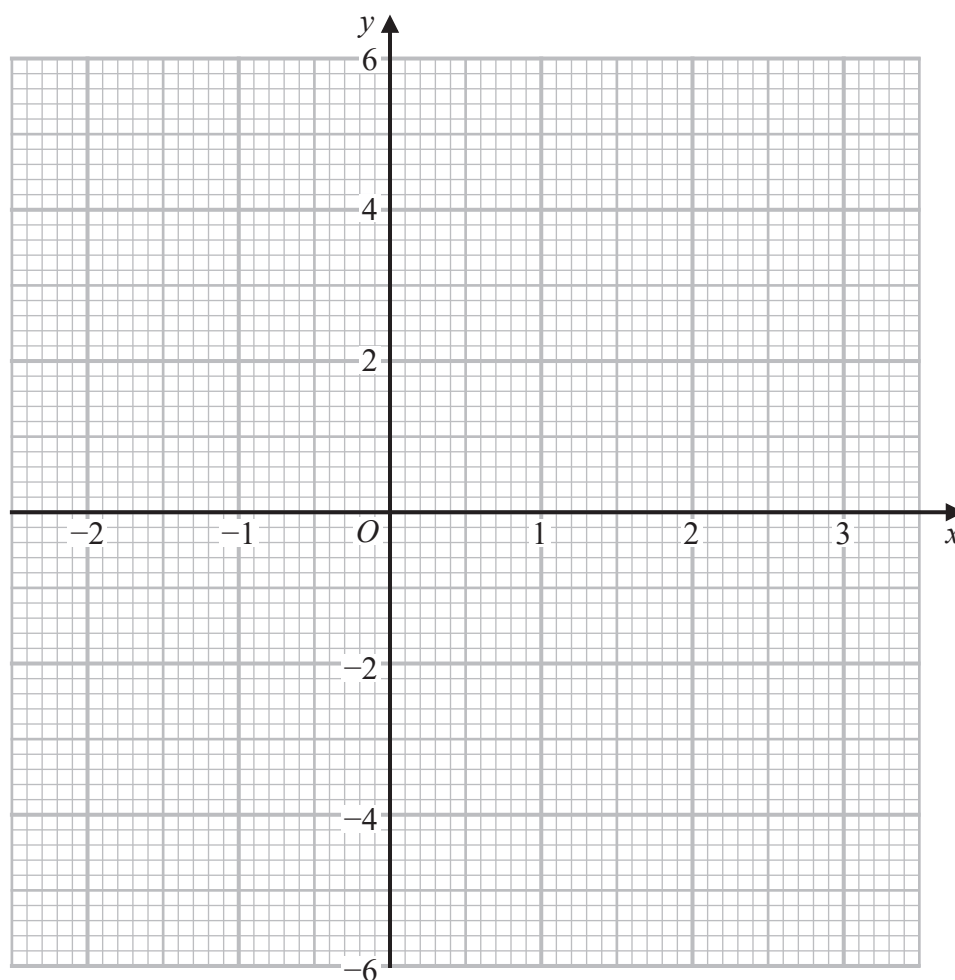
(Total for Question 19 is 4 marks)

20 (a) Complete the table of values for $y = x^2 - x - 2$

x	-2	-1	0	1	2	3
y	4			-2		

(2)

(b) On the grid, draw the graph of $y = x^2 - x - 2$ for values of x from -2 to 3

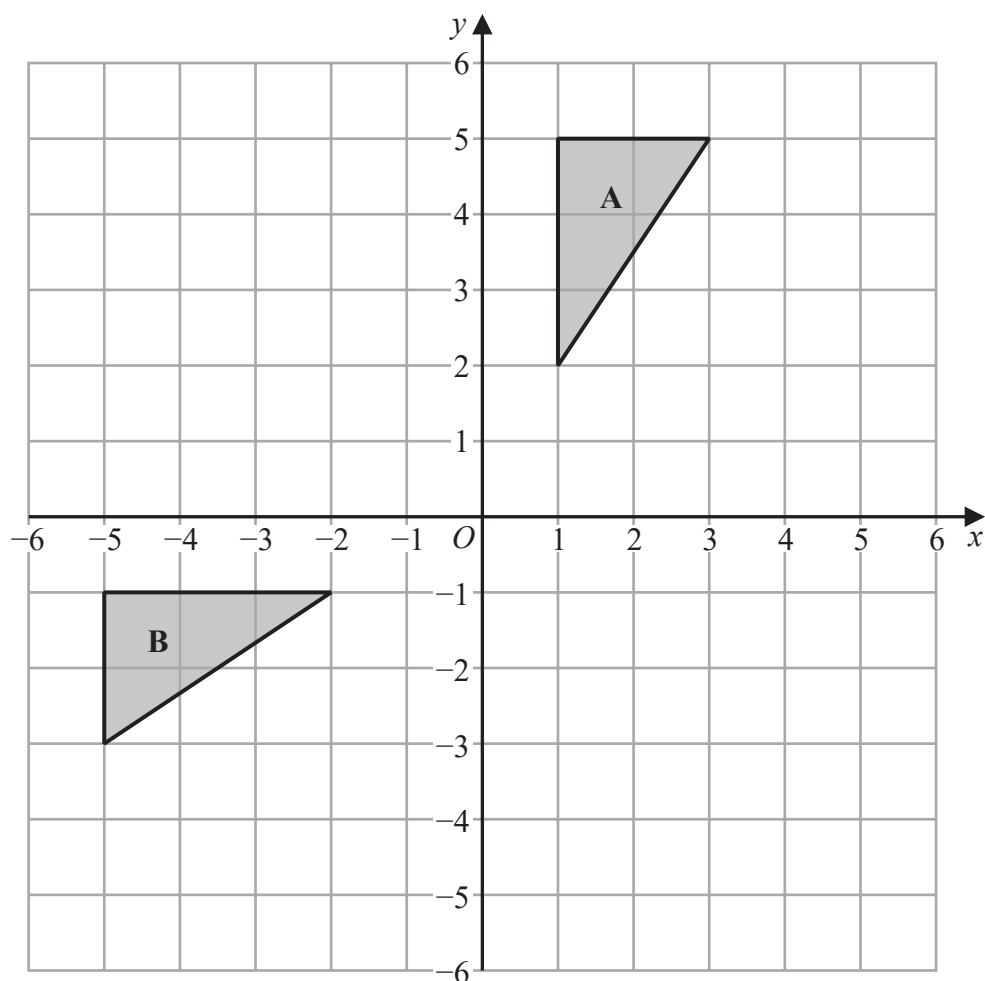


(2)

(Total for Question 20 is 4 marks)



21



Describe fully the single transformation that maps triangle **A** onto triangle **B**.

.....

.....

.....

(Total for Question 21 is 2 marks)



DO NOT WRITE IN THIS AREA

DO NOT WRITE IN THIS AREA

DO NOT WRITE IN THIS AREA

22 (a) Expand and simplify $3(2y - 5) + 7(y + 2)$

(2)

(b) Factorise fully $6x^2 + 15x$

(2)

(c) Make g the subject of the formula $f = 3g + 11$

(2)

(Total for Question 22 is 6 marks)



23 Karen is organising a party for a charity.

She spends

£100 on food

£120 on a hall

£80 on a DJ.

Karen sells 54 tickets for the party.

Each ticket costs £7.50

Work out the percentage profit Karen makes for the charity.

.....%

(Total for Question 23 is 4 marks)



DO NOT WRITE IN THIS AREA

DO NOT WRITE IN THIS AREA

DO NOT WRITE IN THIS AREA

- 24** Andrew invests £4500 in a savings account for 2 years.
The account pays compound interest at a rate of 3.4% per year.

Calculate how much Andrew has in this savings account at the end of the 2 years.

£.....

(Total for Question 24 is 2 marks)

- 25** Solve $5x - 14 = 52 - x$

$x =$

(Total for Question 25 is 3 marks)



DO NOT WRITE IN THIS AREA

DO NOT WRITE IN THIS AREA

DO NOT WRITE IN THIS AREA

- 26 Chris, Debbie and Errol share some money in the ratio 3:4:2
Debbie gets £120

Chris then gives some of his share to Debbie and some of his share to Errol.
The money that Chris, Debbie and Errol each have is now in the ratio 2:5:3

How much money did Chris give to Errol?

£.....

(Total for Question 26 is 4 marks)

- 27 The bearing of port B from port A is 147°

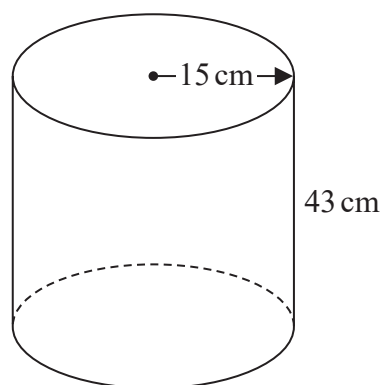
Work out the bearing of port A from port B .

o

(Total for Question 27 is 2 marks)



28 The diagram shows an empty tank in the shape of a cylinder.



The cylinder has radius 15 cm and height 43 cm.

Water flows into the tank at a rate of 0.47 litres per minute.

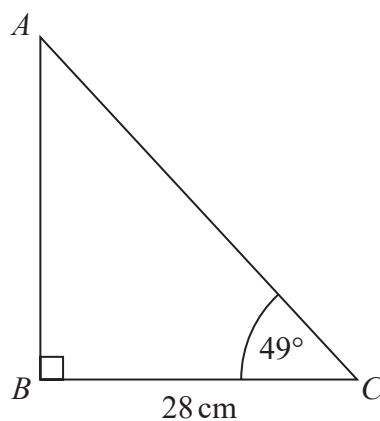
Calculate the number of minutes it will take to completely fill the tank.
Give your answer correct to the nearest minute.

..... minutes

(Total for Question 28 is 4 marks)



29 ABC is a right-angled triangle.



Calculate the length of AB .
Give your answer correct to 3 significant figures.

..... cm

(Total for Question 29 is 2 marks)



30 Solve the simultaneous equations

$$3x + y = -4.5$$

$$4x + 3y = -3.5$$

$$x = \dots\dots\dots$$

$$y = \dots\dots\dots$$

(Total for Question 30 is 3 marks)

TOTAL FOR PAPER IS 80 MARKS

DO NOT WRITE IN THIS AREA

DO NOT WRITE IN THIS AREA

DO NOT WRITE IN THIS AREA



DO NOT WRITE IN THIS AREA

DO NOT WRITE IN THIS AREA

DO NOT WRITE IN THIS AREA

BLANK PAGE



DO NOT WRITE IN THIS AREA

DO NOT WRITE IN THIS AREA

DO NOT WRITE IN THIS AREA

BLANK PAGE



Pearson Edexcel GCSE (9–1) Mathematics

Friday 10 November 2023 – Morning

Syllabus
reference

1MA1/2F

Mathematics

PAPER 2 (Calculator)

Foundation Tier

Formulae Sheet

Do not return this Sheet with the question paper.

Turn over ►

P69531A

©2023 Pearson Education Ltd.

Z:1/1/1/1/1/1/1/




Pearson

Foundation Tier Formulae Sheet**Perimeter, area and volume**

Where a and b are the lengths of the parallel sides and h is their perpendicular separation:

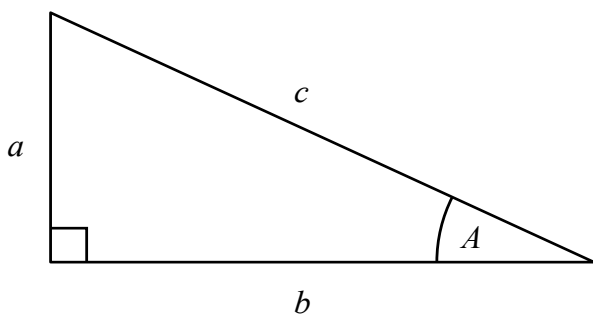
$$\text{Area of a trapezium} = \frac{1}{2} (a + b) h$$

Volume of a prism = area of cross section \times length

Where r is the radius and d is the diameter:

$$\text{Circumference of a circle} = 2\pi r = \pi d$$

$$\text{Area of a circle} = \pi r^2$$

Pythagoras' Theorem and Trigonometry

In any right-angled triangle where a , b and c are the length of the sides and c is the hypotenuse:

$$a^2 + b^2 = c^2$$

In any right-angled triangle ABC where a , b and c are the length of the sides and c is the hypotenuse:

$$\sin A = \frac{a}{c} \quad \cos A = \frac{b}{c} \quad \tan A = \frac{a}{b}$$

Compound Interest

Where P is the principal amount, r is the interest rate over a given period and n is number of times that the interest is compounded:

$$\text{Total accrued} = P \left(1 + \frac{r}{100} \right)^n$$

Probability

Where $P(A)$ is the probability of outcome A and $P(B)$ is the probability of outcome B :

$$P(A \text{ or } B) = P(A) + P(B) - P(A \text{ and } B)$$

END OF EXAM AID