



Please write clearly in block capitals.

Centre number

Candidate number

Surname _____

Forename(s) _____

Candidate signature _____

GCSE MATHEMATICS

F

Foundation Tier Paper 2 Calculator

Monday 6 November 2017


Morning

Time allowed: 1 hour 30 minutes

Materials

For this paper you must have:

- a calculator
- mathematical instruments.



Instructions

- Use black ink or black ball-point pen. Draw diagrams in pencil.
- Answer **all** questions.
- You must answer the questions in the spaces provided. Do not write outside the box around each page or on blank pages.
- Do all rough work in this book. Cross through any work you do not want to be marked.

Information

- The marks for questions are shown in brackets.
- The maximum mark for this paper is 80.
- You may ask for more answer paper, graph paper and tracing paper. These must be tagged securely to this answer book.

For Examiner's Use	
Pages	Mark
2–3	
4–5	
6–7	
8–9	
10–11	
12–13	
14–15	
16–17	
18–19	
20–21	
22–23	
24–25	
TOTAL	

Advice

- In all calculations, show clearly how you work out your answer.



N 0 V 1 7 8 3 0 0 2 F 0 1

Answer **all** questions in the spaces provided

- 1** How many minutes are there in $2\frac{1}{4}$ hours?

Circle your answer.

[1 mark]

135

145

215

225

- 2** Which of these numbers is **half** of a square number?

Circle your answer.

[1 mark]

1

2

3

4

- 3** Circle the value of the digit 3 in the number 17.03

[1 mark]

$\frac{3}{10}$

$\frac{1}{30}$

$\frac{3}{100}$

$\frac{1}{300}$



- 4 The value of A is double the value of B .
Circle the correct formula.

[1 mark]

$$A = B + 2$$

$$A = 2B$$

$$A = \frac{B}{2}$$

$$A = B^2$$

- 5 (a) Simplify $y \times y$

[1 mark]

Answer _____

- 5 (b) Simplify $5a + 2 - a + 9$

[2 marks]

Answer _____

Turn over for the next question




6 The table shows information about the birds in a garden.

Bird	Number
Robin	2
Sparrow	5
Wren	3
Lark	1

Draw a bar chart to show the information.

[3 marks]



7

Eve has these coins.



Ola has these coins.



Eve gives **three** of her coins to Ola.

Now, Ola has the same amount of money as Eve.

Which coins does Eve give to Ola?

[3 marks]

Answer _____ , _____ , _____

Turn over for the next question



8 A dry cleaning shop has the following offers.

Suit



Normal price £12.50
1st suit normal price
2nd suit half price

Dress



Normal price £9.75
Three for the price of two

Work out the **total** price for 2 suits and 6 dresses.

[4 marks]

Answer £ _____



9 Karl has twin sisters.

The sum of the ages of Karl and his twin sisters is 39

In 4 years' time the twins will be 18

How old will Karl be in 4 years' time?

[3 marks]

Answer _____

Turn over for the next question



10 One of the angles in a triangle is 60°

Tick a box for each statement.

	Must be true	Cannot be true	Might be true
The triangle is equilateral			
The triangle has at least one other acute angle			
The triangle is right-angled			
The other two angles are each less than 60°			

[4 marks]



11 Which of these numbers has **exactly** two factors?

Circle your answer.

[1 mark]

6

7

8

9

12 Work out $\sqrt{7.5^2 + 18^2}$

Circle your answer.

[1 mark]

19.5

25.5

331.5

380.25

13 (a) Use your calculator to work out the exact value of $\frac{18\,953 \times 437}{11}$

[1 mark]

Answer _____

13 (b) Use approximations to 1 significant figure to check if your answer to part (a) is sensible.

[3 marks]



14 Chris sells lawnmowers.

The table shows the number he sold each quarter for three years.

	Quarter 1	Quarter 2	Quarter 3	Quarter 4
2016	17	64	50	5
2015	9	72	61	1
2014	19	58	53	2

14 (a) In which year did he sell the most lawnmowers?

You **must** show your working.

[2 marks]

Answer _____

14 (b) He uses the table to decide the number of lawnmowers to stock each quarter.

At the **start** of which quarter should Chris stock the most lawnmowers?

Circle your answer.

[1 mark]

Quarter 1

Quarter 2

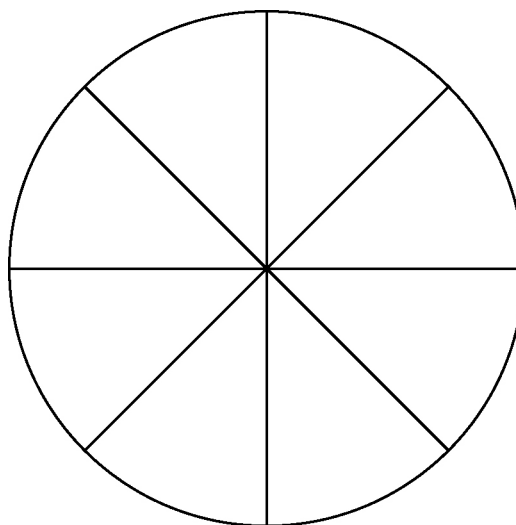
Quarter 3

Quarter 4



16

A wheel is made of a circular rim and 8 spokes as shown.



Not drawn
accurately

The length of each spoke is 37 cm

Work out the **total** length of the rim and spokes.

[3 marks]

Answer _____ cm



17 Here is a formula to convert degrees Celsius ($^{\circ}\text{C}$) to degrees Fahrenheit ($^{\circ}\text{F}$).

$$F = 1.8C + 32$$

F is the number of degrees Fahrenheit

C is the number of degrees Celsius

17 (a) Show that $-40^{\circ}\text{C} = -40^{\circ}\text{F}$

[2 marks]

17 (b) The temperature is -15°C

Nick says,

“Because the temperature is negative in Celsius, it **must** be negative in Fahrenheit.”

Is he correct?

You **must** show your working.

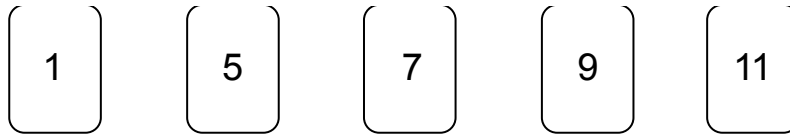
[1 mark]

Answer _____



18

Here are five cards.



One of the cards is removed.

The mean of the numbers on the remaining four cards is 6

Which card was removed?

You **must** show your working.**[3 marks]**

Answer _____



19 (a) Divide 120 in the ratio 1 : 4

[2 marks]

Answer _____ :

19 (b) Write the ratio 7 : 4 in the form $n : 1$

[1 mark]

Answer _____ :

Turn over for the next question



- 21** An experiment is carried out 200 times.
The possible outcomes are K, L and M.

21 (a) Complete the table.

[2 marks]

Outcome	K	L	M
Frequency	84	54	
Relative frequency	0.42		

- 21 (b)** Altogether, the experiment is carried out 500 times.

How many times would you expect the outcome to be K?

[2 marks]

Answer _____

Turn over for the next question

Turn over ►



22 The table shows information about the UK and Germany.

	Population	Area (square miles)
UK	64 000 000	95 000
Germany	82 000 000	140 000

$$\text{Population density} = \frac{\text{population}}{\text{area}}$$

Compare the population densities of the UK and Germany.

[3 marks]

23 Which **one** of the following is discrete data?

Circle your answer.

[1 mark]

Mass of a television

Time taken to deliver a television

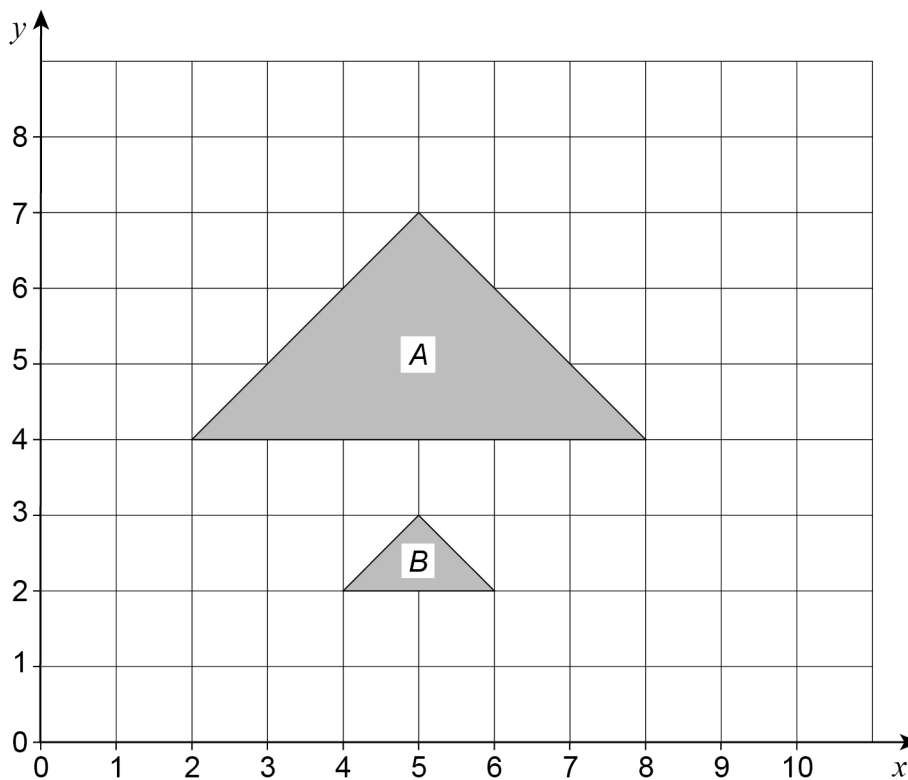
Height of a television mast

Number of televisions sold



24

Describe fully the **single** transformation that maps triangle *A* to triangle *B*.



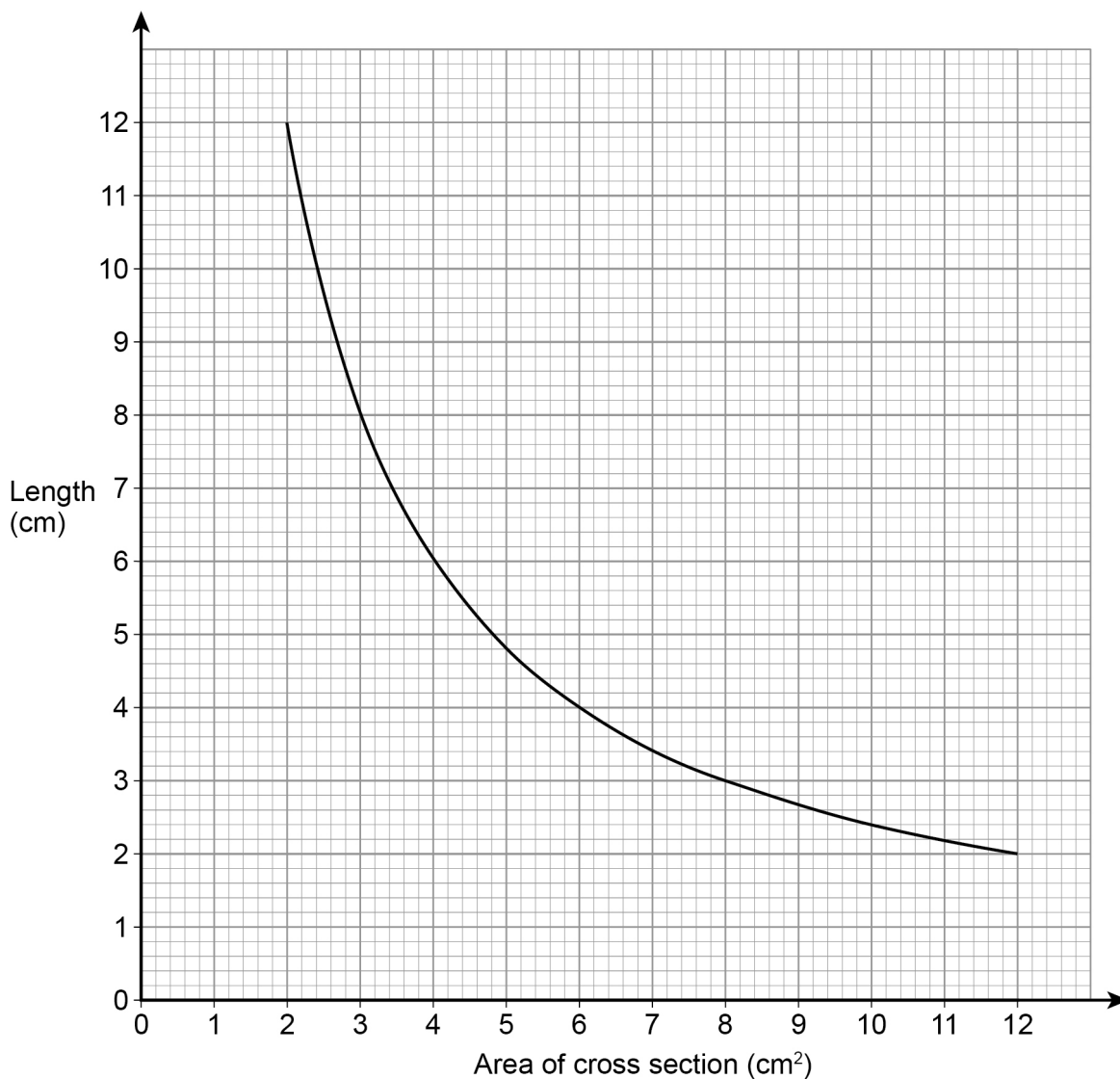
[3 marks]

Turn over for the next question

Turn over ►



25 The graph shows information about prisms with the same volume.

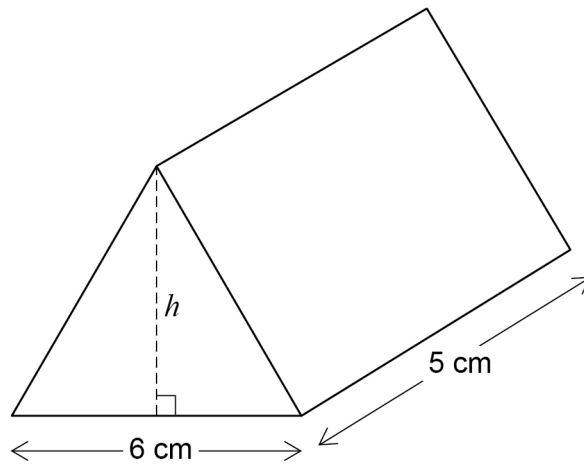


25 (a) Give **one** example to show the volume is 24 cm³

[1 mark]



- 25 (b)** The diagram shows a prism with volume 24 cm^3
The height of the triangular cross section is h .



Work out the height, h .

[3 marks]

Answer _____ cm

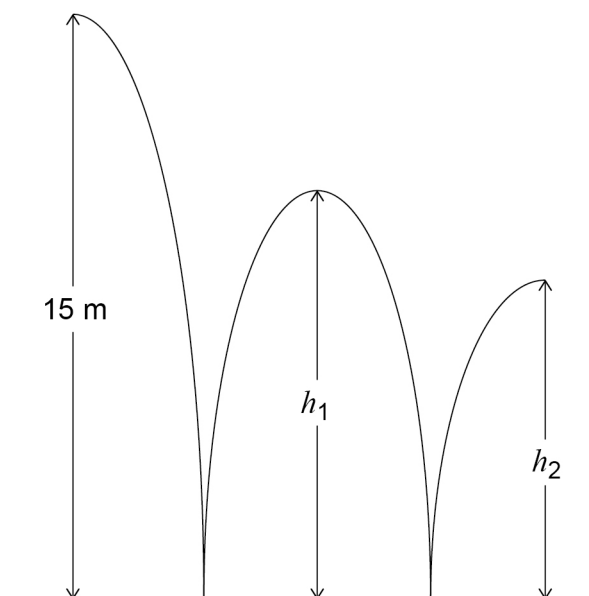
Turn over for the next question



26

A ball is thrown from a height of 15 metres.
It bounces to height h_1 , then to height h_2 as shown.

Not drawn
accurately



h_1 is three quarters of the original height.

26 (a) Jack expects h_2 to be three quarters of h_1

Work out the value of h_2 that he expects.

[2 marks]

Answer _____ metres



26 (b) In fact, h_2 is two thirds of h_1

How does this affect the answer to part (a)?

Tick a box.

The ball bounced higher than he expected

The ball bounced lower than he expected

Show working to support your answer.

[2 marks]

Turn over for the next question

—
4

Turn over ►



27 Solve $4(3x - 2) = 2x - 5$

[3 marks]

$x =$ _____

28 Work out the next term of this quadratic sequence.

[2 marks]

5 8 14 23

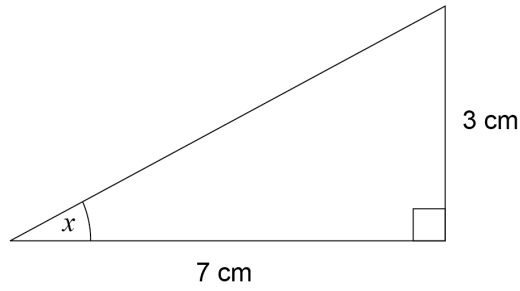
Answer _____



29

Work out the size of angle x .

Not drawn
accurately



[2 marks]

Answer _____ degrees

END OF QUESTIONS



There are no questions printed on this page

**DO NOT WRITE ON THIS PAGE
ANSWER IN THE SPACES PROVIDED**



There are no questions printed on this page

**DO NOT WRITE ON THIS PAGE
ANSWER IN THE SPACES PROVIDED**



There are no questions printed on this page

**DO NOT WRITE ON THIS PAGE
ANSWER IN THE SPACES PROVIDED**

Copyright Information

For confidentiality purposes, from the November 2015 examination series, acknowledgements of third party copyright material will be published in a separate booklet rather than including them on the examination paper or support materials. This booklet is published after each examination series and is available for free download from www.aqa.org.uk after the live examination series.

Permission to reproduce all copyright material has been applied for. In some cases, efforts to contact copyright-holders may have been unsuccessful and AQA will be happy to rectify any omissions of acknowledgements. If you have any queries please contact the Copyright Team, AQA, Stag Hill House, Guildford, GU2 7XJ.

Copyright © 2017 AQA and its licensors. All rights reserved.

