



Please write clearly in block capitals.

Centre number

| | | | | |
|--|--|--|--|--|
| | | | | |
|--|--|--|--|--|

Candidate number

| | | | |
|--|--|--|--|
| | | | |
|--|--|--|--|

Surname

Forename(s)

Candidate signature

GCSE MATHEMATICS

F


Foundation Tier Paper 1 Non-Calculator

Tuesday 6 November 2018 Morning Time allowed: 1 hour 30 minutes

Materials

For this paper you must have:

- mathematical instruments



You must **not** use a calculator.

Instructions

- Use black ink or black ball-point pen. Draw diagrams in pencil.
- Fill in the boxes at the top of this page.
- Answer **all** questions.
- You must answer the questions in the spaces provided. Do not write outside the box around each page or on blank pages.
- Do all rough work in this book. Cross through any work you do not want to be marked.

Information

- The marks for questions are shown in brackets.
- The maximum mark for this paper is 80.
- You may ask for graph paper, tracing paper and more answer paper. These must be tagged securely to this answer book.

| For Examiner's Use | |
|--------------------|------|
| Pages | Mark |
| 2–3 | |
| 4–5 | |
| 6–7 | |
| 8–9 | |
| 10–11 | |
| 12–13 | |
| 14–15 | |
| 16–17 | |
| 18–19 | |
| 20–21 | |
| 22 | |
| TOTAL | |

Advice

In all calculations, show clearly how you work out your answer.



N 0 V 1 8 8 3 0 0 1 F 0 1

Answer **all** questions in the spaces provided

- 1** Work out $(-3) + (-8)$
Circle your answer.

[1 mark]

-5

5

-11

11

- 2** What does the longest bar in a bar chart represent?
Circle your answer.

[1 mark]

mean

median

mode

range

- 3** Work out $1.1 - 0.15$
Circle your answer.

[1 mark]

0.95

1.05

0.85

1.085



Do not write
outside the
box

4 On a circle, which of these is **always** longer than the diameter?
Circle your answer.

[1 mark]

chord

arc

radius

circumference

5 Work out 83×26

[3 marks]

Answer _____

7

Turn over ►



6 The cost of 3 calendars is £18

Work out the cost of 5 calendars.

[2 marks]

Answer £ _____

7 A helicopter blade does 3206 full turns in 7 minutes.

Work out the number of full turns per minute.

[2 marks]

Answer _____

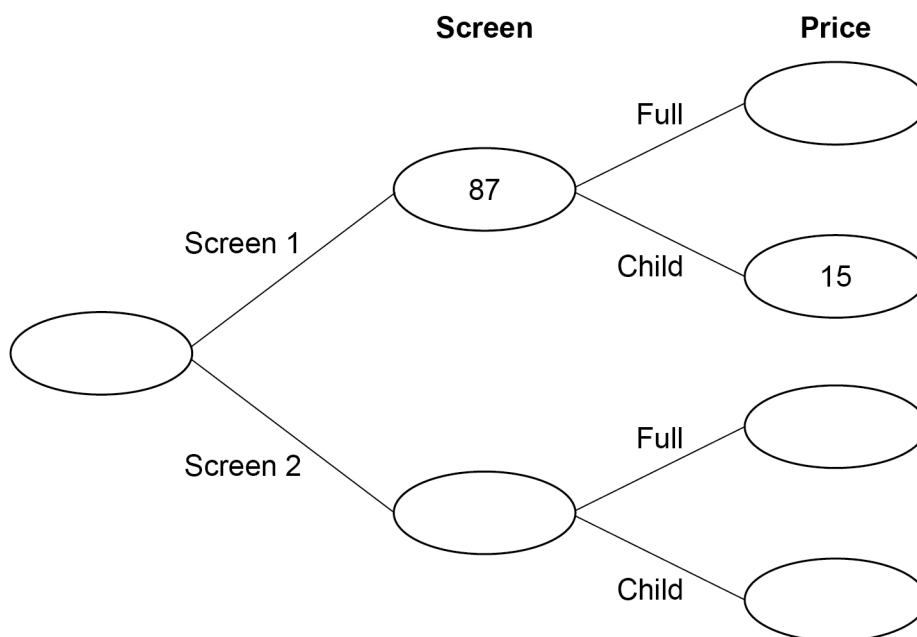


8 At a cinema, films are shown on Screen 1 and Screen 2
Customers pay full price or child price.

There are three times as many customers in Screen 2 as Screen 1
68 customers paid child price.

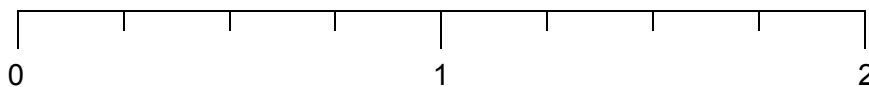
Complete the frequency tree.

[5 marks]



9

Work out the fraction that is halfway between $\frac{1}{2}$ and $1\frac{1}{4}$

**[3 marks]**

Answer _____

10

x is a positive integer.

$35 \div x$ is a positive integer.

Work out the **four** possible values of x .

[2 marks]

Answer _____



11 A fair dice has six sides, numbered 1 to 6
After it is rolled, five of the numbers can be seen.

11 (a) Write down the probability that one of these five numbers is 2

[1 mark]

Answer _____

11 (b) Work out the **greatest** possible sum of the five numbers.

[2 marks]

Answer _____

Turn over for the next question



12 Work out $\frac{2}{7} + \frac{6}{7}$

Circle your answer.

[1 mark]

$1\frac{1}{7}$

$\frac{8}{14}$

$\frac{8}{49}$

$1\frac{5}{7}$

13 Work out $4 + 3 \times 5 - 1$

Circle your answer.

[1 mark]

16

18

28

34

14 The n th term of a sequence is $5n - 2$

Work out the 3rd term.

Circle your answer.

[1 mark]

51

5

123

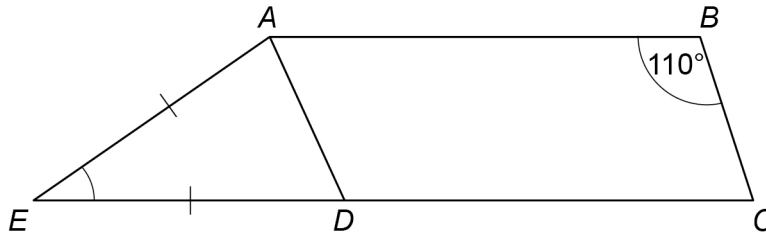
13



15

Trapezium $ABCE$ is made from parallelogram $ABCD$ and isosceles triangle ADE .

$AE = DE$



Not drawn
accurately

Work out the size of angle AED .

[3 marks]

Answer _____ degrees

16

$a : b = 1 : 6$

$a : c = 3 : 1$

How many times bigger is b than c ?

[2 marks]

Answer _____



17 (a) Laura wants to work out 3% of 1700

Her method is 1700×0.3

Is her method correct?

Tick a box.

Yes

No

Give a reason for your answer.

[1 mark]

17 (b) Laura also wants to work out $\frac{30}{29}$ of 60

Her answer is 58

Is her answer correct?

Tick a box.

Yes

No

Give a reason for your answer.

[1 mark]



18 Here are five shapes, A to E.

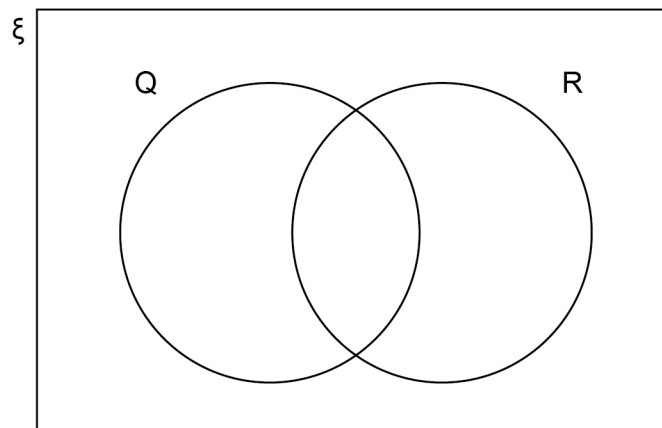
| | |
|---|------------------|
| A | Parallelogram |
| B | Regular pentagon |
| C | Rhombus |
| D | Scalene triangle |
| E | Trapezium |

In the Venn diagram,

ξ is the set of all shapes

Q is the set of quadrilaterals

R is the set of shapes which **always** have rotational symmetry.



Complete the Venn diagram with the letters A to E.

[3 marks]



19 $a = 7$ and $b = 2$

Work out the value of $\frac{a}{b} - a^b$

[3 marks]

Answer _____

20 Solve $3x - 8 = 19$

[2 marks]

$x =$ _____



21

Here are five number cards.

17

12

23

15

16

Two of the five cards are picked at random.

Work out the probability that the total of the two numbers is **more than 30****[3 marks]**

Answer _____



Do not write outside the box

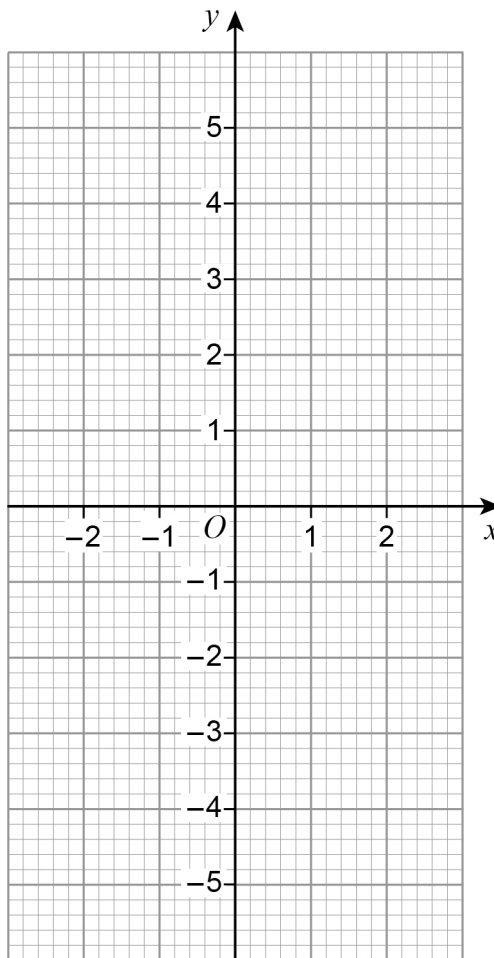
22 (a) Complete the table of values for $y = x^2$

[1 mark]

| | | | | | |
|-----|----|----|---|---|---|
| x | -2 | -1 | 0 | 1 | 2 |
| y | | | | | |

22 (b) Draw the graph of $y = x^2$ for values of x from -2 to 2

[2 marks]



22 (c) Use your graph to estimate the value of $\sqrt{2.6}$

[2 marks]

Answer _____



23 Two consecutive whole numbers are n and $n + 1$

23 (a) Simplify $n - (n + 1)$

[1 mark]

Answer _____

23 (b) Multiply out $n(n + 1)$

[1 mark]

Answer _____

23 (c) The two numbers are added.

Show that the answer must be an odd number.

[2 marks]



24 Circle the value of $\cos 30^\circ$

[1 mark]

$$\frac{1}{2}$$

$$\frac{\sqrt{3}}{2}$$

0

1

25 Work out $8\frac{1}{2} \div 2\frac{2}{3}$

Give your answer as a mixed number.

[4 marks]

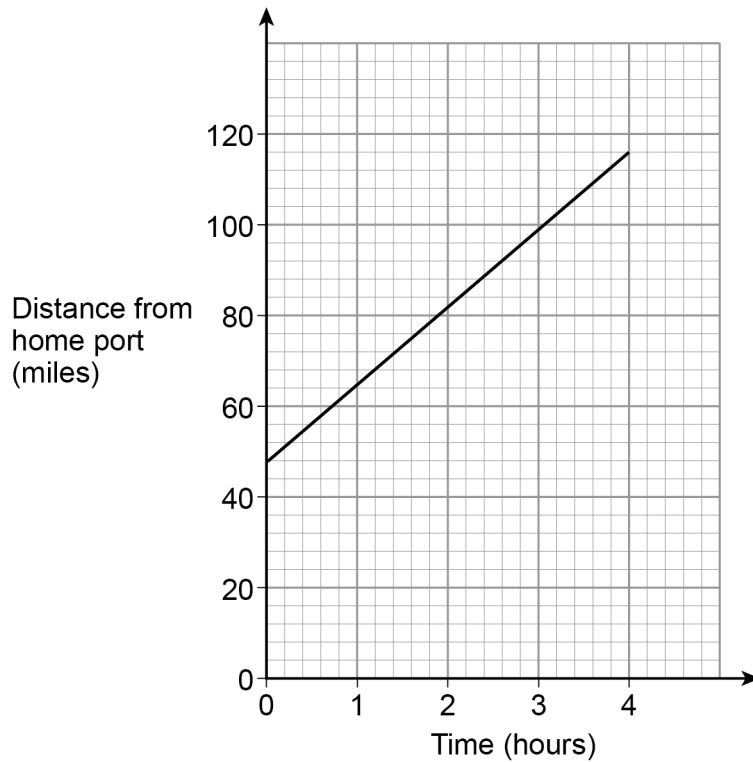
Answer _____



Do not write
outside the
box

26

A ship is sailing in a straight line from its home port.
The distance-time graph shows 4 hours of the journey.



Work out the speed of the ship during these 4 hours.

[3 marks]

Answer _____ mph

Turn over ►



- 27** Kim works at an airport in the UK.
She records the number of planes landing between 10 am and 2 pm each day.
The table shows the data for the first 10 days in January.

| Day | 1 | 2 | 3 | 4 | 5 | 6 | 7 | 8 | 9 | 10 |
|------------------|-----|-----|-----|-----|-----|-----|-----|-----|-----|-----|
| Number of planes | 148 | 151 | 147 | 155 | 153 | 147 | 155 | 102 | 151 | 154 |

- 27 (a)** The airport was affected by fog on one of the days.

Which day do you think it was?

Give a reason for your answer.

[1 mark]

Day _____

Reason _____

- 27 (b)** Kim uses the data to predict how many planes will land at the airport in a year.

In her method, she

uses an estimate of 150 planes in each 4-hour period throughout the day

assumes the same number of planes each day.

Work out her prediction.

[3 marks]

Answer _____



27 (c)

In fact,

fewer planes land in winter than in summer

fewer planes land at night than during the day.

What does this tell you about Kim's prediction?

Tick **one** box.

Her prediction is too low

Her prediction is too high

Her prediction could be too low or too high

Give a reason for your answer.

[2 marks]

Turn over for the next question



28

The sum of the angles in any quadrilateral is 360°

For example, in a rectangle $4 \times 90^\circ = 360^\circ$

Zak writes,

$5 \times 90^\circ = 450^\circ$ so the sum of the angles in any pentagon must be 450°

Is he correct?

Tick a box.

Yes

No

Show working to support your answer.

[2 marks]



Do not write
outside the
box

29

$$\sqrt{6^2 + 8^2} = \sqrt[3]{125a^3}$$

Work out the value of a .

[4 marks]

Answer _____

30

Work out the percentage increase from 80 to 280

[3 marks]

Answer _____ %

Turn over for the next question

Turn over ►



Do not write
outside the
box

31

Solve $x^2 - x - 12 = 0$

[3 marks]

Answer _____

END OF QUESTIONS

3



There are no questions printed on this page

*Do not write
outside the
box*

**DO NOT WRITE ON THIS PAGE
ANSWER IN THE SPACES PROVIDED**



There are no questions printed on this page

*Do not write
outside the
box*

**DO NOT WRITE ON THIS PAGE
ANSWER IN THE SPACES PROVIDED**

Copyright information

For confidentiality purposes, from the November 2015 examination series, acknowledgements of third-party copyright material will be published in a separate booklet rather than including them on the examination paper or support materials. This booklet is published after each examination series and is available for free download from www.aqa.org.uk after the live examination series.

Permission to reproduce all copyright material has been applied for. In some cases, efforts to contact copyright-holders may have been unsuccessful and AQA will be happy to rectify any omissions of acknowledgements. If you have any queries please contact the Copyright Team, AQA, Stag Hill House, Guildford, GU2 7XJ.

Copyright © 2018 AQA and its licensors. All rights reserved.

