

Write your name here

Surname

Other names

Centre Number

Candidate Number

**Pearson Edexcel**  
**Level 1/Level 2 GCSE (9–1)**

# Mathematics

## Paper 3 (Calculator)

**Higher Tier**

Wednesday 8 November 2017 – Morning

**Time: 1 hour 30 minutes**

Paper Reference

**1MA1/3H**

**You must have:** Ruler graduated in centimetres and millimetres, protractor, pair of compasses, pen, HB pencil, eraser, calculator. Tracing paper may be used.

Total Marks

### Instructions

- Use **black** ink or ball-point pen.
- **Fill in the boxes** at the top of this page with your name, centre number and candidate number.
- Answer **all** questions.
- Answer the questions in the spaces provided – *there may be more space than you need.*
- You must **show all your working.**
- Diagrams are **NOT** accurately drawn, unless otherwise indicated.
- **Calculators may be used.**
- If your calculator does not have a  $\pi$  button, take the value of  $\pi$  to be 3.142 unless the question instructs otherwise.



### Information

- The total mark for this paper is 80
- The marks for **each** question are shown in brackets – *use this as a guide as to how much time to spend on each question.*

### Advice

- Read each question carefully before you start to answer it.
- Keep an eye on the time.
- Try to answer every question.
- Check your answers if you have time at the end.

Turn over ►

P49384A

©2017 Pearson Education Ltd.

6/6/6/7/2/2/



  
**Pearson**

**Answer ALL questions.**

**Write your answers in the spaces provided.**

**You must write down all the stages in your working.**

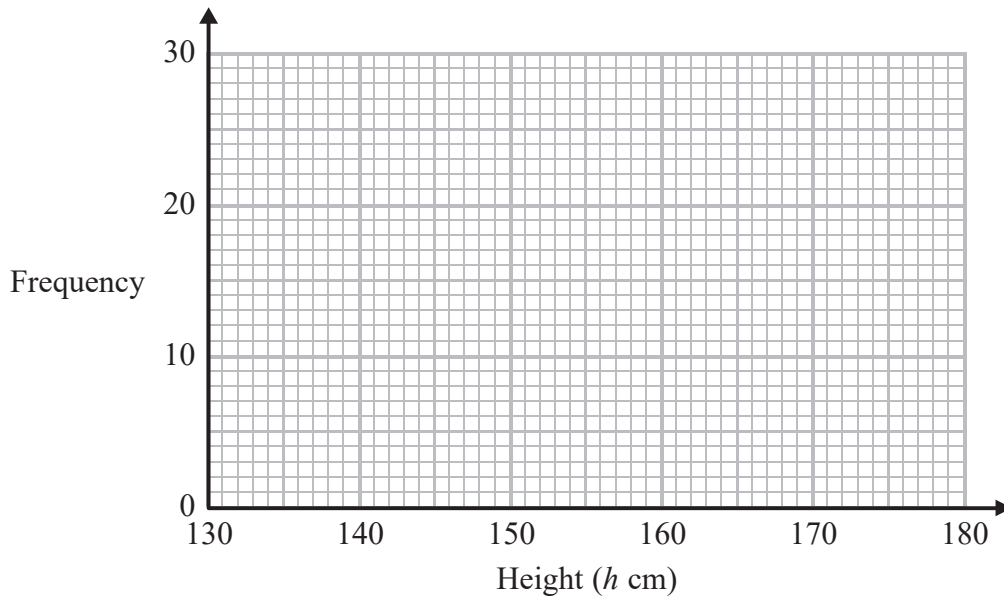
1 The table shows information about the heights of 80 children.

Height ( $h$ cm)	Frequency
$130 < h \leq 140$	4
$140 < h \leq 150$	11
$150 < h \leq 160$	24
$160 < h \leq 170$	22
$170 < h \leq 180$	19

(a) Find the class interval that contains the median.

.....  
(1)

(b) Draw a frequency polygon for the information in the table.



(2)

**(Total for Question 1 is 3 marks)**



DO NOT WRITE IN THIS AREA

DO NOT WRITE IN THIS AREA

DO NOT WRITE IN THIS AREA

- 2 In London, 1 litre of petrol costs 108.9p  
In New York, 1 US gallon of petrol costs \$2.83

1 US gallon = 3.785 litres  
£1 = \$1.46

In which city is petrol better value for money, London or New York?  
You must show your working.

(Total for Question 2 is 3 marks)

- 3 A gold bar has a mass of 12.5 kg.

The density of gold is 19.3 g/cm<sup>3</sup>

Work out the volume of the gold bar.  
Give your answer correct to 3 significant figures.

..... cm<sup>3</sup>

(Total for Question 3 is 3 marks)



4 There are only blue pens, green pens and red pens in a box.

The ratio of the number of blue pens to the number of green pens is 2 : 5

The ratio of the number of green pens to the number of red pens is 4 : 1

There are less than 100 pens in the box.

What is the greatest possible number of red pens in the box?

.....  
**(Total for Question 4 is 3 marks)**

5 (a) Find the value of the reciprocal of 1.6  
Give your answer as a decimal.

.....  
**(1)**

Jess rounds a number,  $x$ , to one decimal place.  
The result is 9.8

(b) Write down the error interval for  $x$ .

.....  
**(2)**

**(Total for Question 5 is 3 marks)**



DO NOT WRITE IN THIS AREA

DO NOT WRITE IN THIS AREA

DO NOT WRITE IN THIS AREA

DO NOT WRITE IN THIS AREA

DO NOT WRITE IN THIS AREA


DO NOT WRITE IN THIS AREA

6 Here is a rectangle.



The length of the rectangle is 7 cm longer than the width of the rectangle.

4 of these rectangles are used to make this 8-sided shape.



The perimeter of the 8-sided shape is 70 cm.

Work out the area of the 8-sided shape.

..... cm<sup>2</sup>

(Total for Question 6 is 5 marks)



- 7 Work out  $(13.8 \times 10^7) \times (5.4 \times 10^{-12})$   
Give your answer as an ordinary number.

.....  
(Total for Question 7 is 2 marks)

DO NOT WRITE IN THIS AREA

DO NOT WRITE IN THIS AREA

DO NOT WRITE IN THIS AREA



- 8 When a drawing pin is dropped it can land point down or point up.

Lucy, Mel and Tom each dropped the drawing pin a number of times.

The table shows the number of times the drawing pin landed point down and the number of times the drawing pin landed point up for each person.

	Lucy	Mel	Tom
point down	31	53	16
point up	14	27	9

Rachael is going to drop the drawing pin once.

- (a) Whose results will give the best estimate for the probability that the drawing pin will land point up?  
Give a reason for your answer.

(1)

Stuart is going to drop the drawing pin twice.

- (b) Use all the results in the table to work out an estimate for the probability that the drawing pin will land point up the first time and point down the second time.

(2)

**(Total for Question 8 is 3 marks)**



9 Jack bought a new boat for £12 500

The value, £ $V$ , of Jack's boat at the end of  $n$  years is given by the formula

$$V = 12\,500 \times (0.85)^n$$

- (a) At the end of how many years was the value of Jack's boat first less than 50% of the value of the boat when it was new?

.....  
(2)

A savings account pays interest at a rate of  $R\%$  per year.

Jack invests £5500 in the account for one year.

At the end of the year, Jack pays tax on the interest at a rate of 40%.

After paying tax, he gets £79.20

- (b) Work out the value of  $R$ .

.....  
(3)

(Total for Question 9 is 5 marks)





- 10 There are only blue counters, yellow counters, green counters and red counters in a bag. A counter is taken at random from the bag.

The table shows the probabilities of getting a blue counter or a yellow counter or a green counter.

<b>Colour</b>	blue	yellow	green	red
<b>Probability</b>	0.2	0.35	0.4	

- (a) Work out the probability of getting a red counter.

.....  
(1)

- (b) What is the least possible number of counters in the bag?  
You must give a reason for your answer.

.....  
.....  
(2)

(Total for Question 10 is 3 marks)

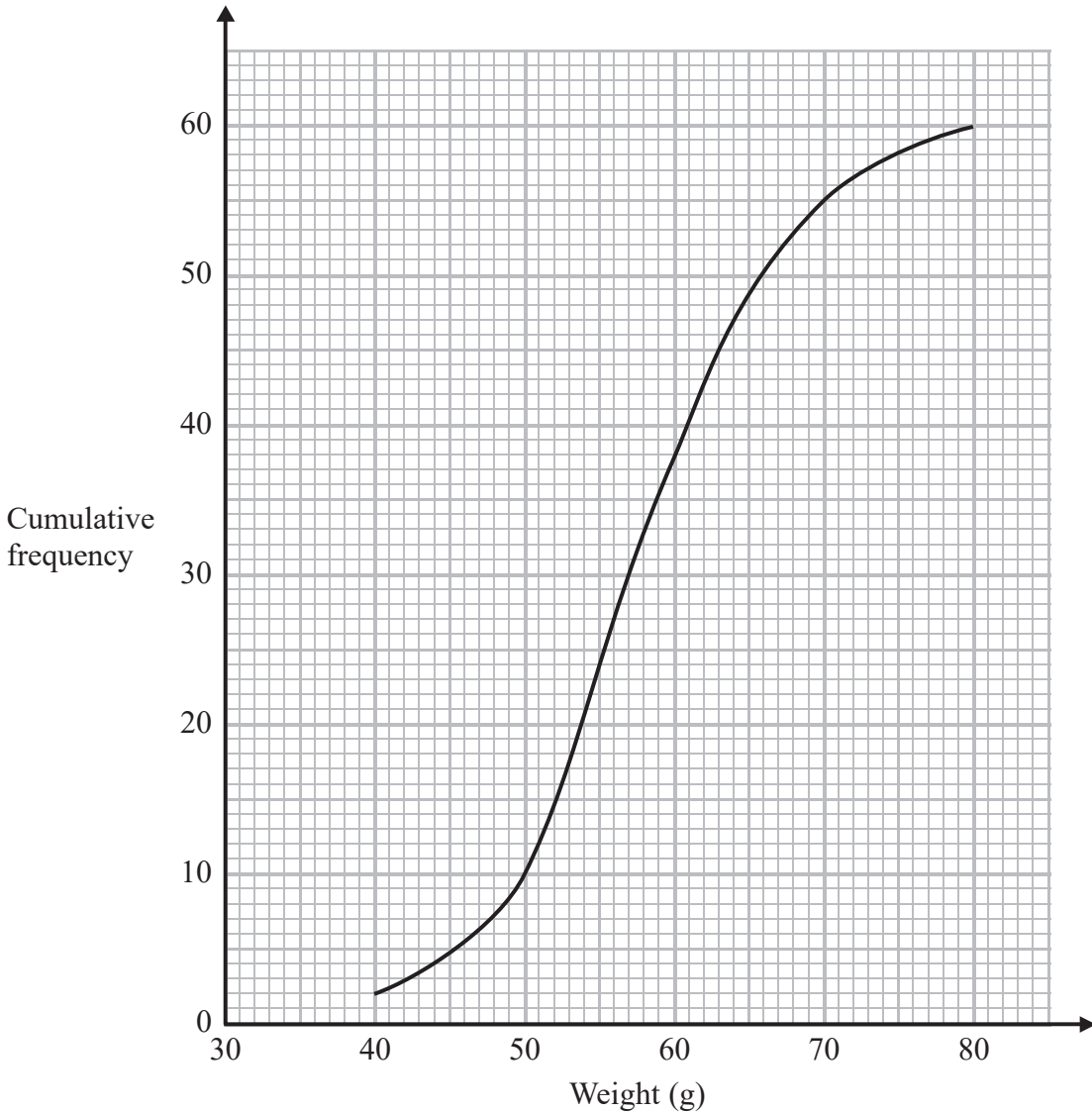
DO NOT WRITE IN THIS AREA

DO NOT WRITE IN THIS AREA

DO NOT WRITE IN THIS AREA



11 The cumulative frequency graph shows information about the weights of 60 potatoes.



(a) Use the graph to find an estimate for the median weight.

..... g  
(1)

Jamil says,

“ $80 - 40 = 40$  so the range of the weights is 40 g.”

(b) Is Jamil correct?

You must give a reason for your answer.

.....  
.....  
(1)



(c) Show that less than 25% of the potatoes have a weight greater than 65 g.

(2)

(Total for Question 11 is 4 marks)

DO NOT WRITE IN THIS AREA

DO NOT WRITE IN THIS AREA

DO NOT WRITE IN THIS AREA





13 Write  $x^2 + 6x - 7$  in the form  $(x + a)^2 + b$  where  $a$  and  $b$  are integers.

.....  
(Total for Question 13 is 2 marks)

14 Cone **A** and cone **B** are mathematically similar.  
The ratio of the volume of cone **A** to the volume of cone **B** is 27 : 8

The surface area of cone **A** is  $297 \text{ cm}^2$

Show that the surface area of cone **B** is  $132 \text{ cm}^2$

(Total for Question 14 is 3 marks)



15 (a) Show that the equation  $x^3 + 7x - 5 = 0$  has a solution between  $x = 0$  and  $x = 1$

(2)

(b) Show that the equation  $x^3 + 7x - 5 = 0$  can be arranged to give  $x = \frac{5}{x^2 + 7}$

(2)

(c) Starting with  $x_0 = 1$ , use the iteration formula  $x_{n+1} = \frac{5}{x_n^2 + 7}$  three times to find an estimate for the solution of  $x^3 + 7x - 5 = 0$

(3)

DO NOT WRITE IN THIS AREA

DO NOT WRITE IN THIS AREA

DO NOT WRITE IN THIS AREA



- (d) By substituting your answer to part (c) into  $x^3 + 7x - 5$ ,  
comment on the accuracy of your estimate for the solution to  $x^3 + 7x - 5 = 0$

(2)

**(Total for Question 15 is 9 marks)**

- 16 The petrol consumption of a car, in litres per 100 kilometres, is given by the formula

$$\text{Petrol consumption} = \frac{100 \times \text{Number of litres of petrol used}}{\text{Number of kilometres travelled}}$$

Nathan's car travelled 148 kilometres, correct to 3 significant figures.  
The car used 11.8 litres of petrol, correct to 3 significant figures.

Nathan says,

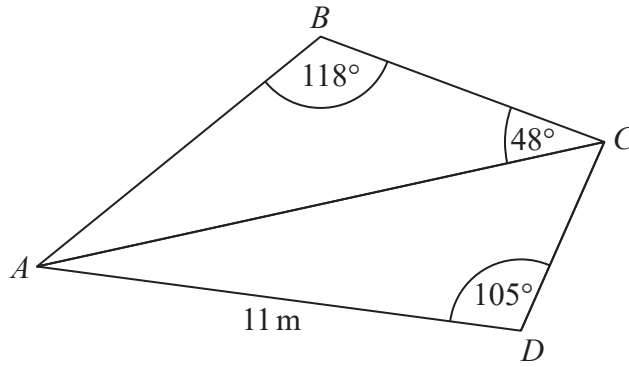
“My car used less than 8 litres of petrol per 100 kilometres.”

Could Nathan be wrong?

You must show how you get your answer.

**(Total for Question 16 is 3 marks)**

17  $ABC$  and  $ADC$  are triangles.



The area of triangle  $ADC$  is  $56 \text{ m}^2$

Work out the length of  $AB$ .

Give your answer correct to 1 decimal place.

..... m

(Total for Question 17 is 5 marks)

DO NOT WRITE IN THIS AREA

DO NOT WRITE IN THIS AREA

DO NOT WRITE IN THIS AREA



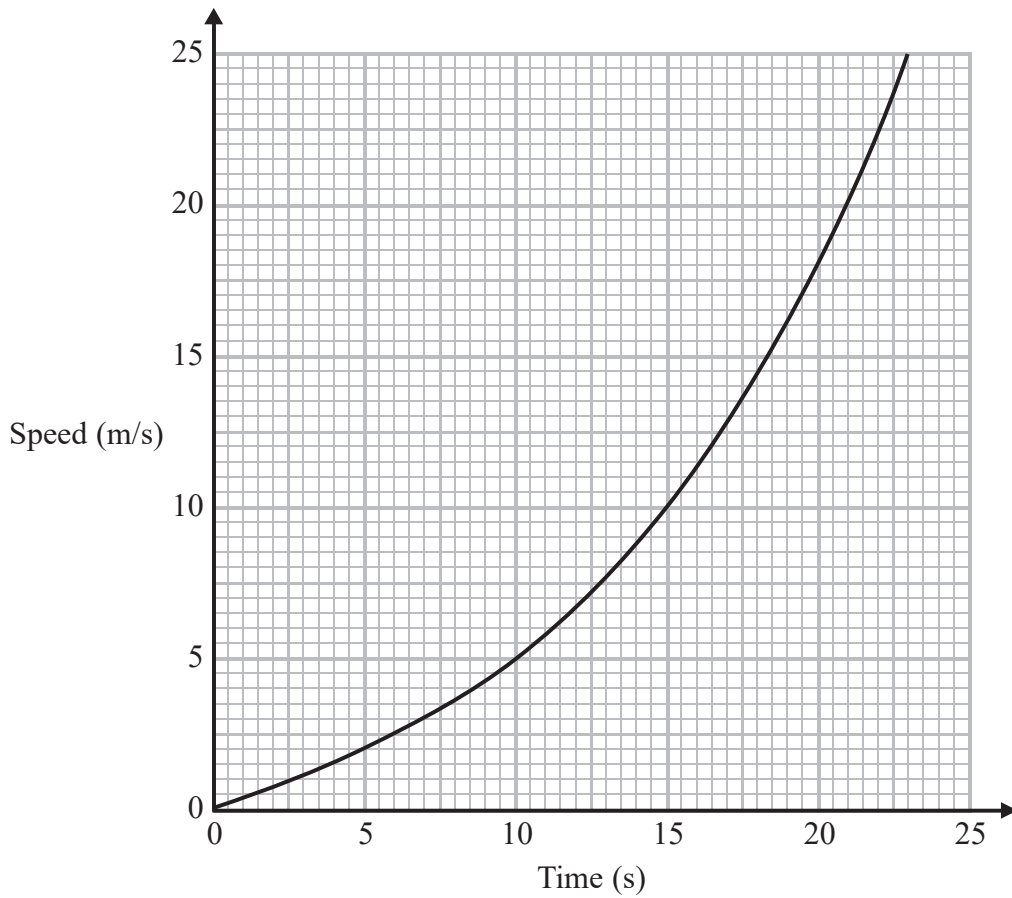


DO NOT WRITE IN THIS AREA

DO NOT WRITE IN THIS AREA

DO NOT WRITE IN THIS AREA

18 Here is a speed-time graph for a train.



- (a) Work out an estimate for the distance the train travelled in the first 20 seconds.  
Use 4 strips of equal width.

..... m  
(3)

- (b) Is your answer to (a) an underestimate or an overestimate of the actual distance the train travelled?  
Give a reason for your answer.

.....  
.....  
(1)

**(Total for Question 18 is 4 marks)**



19 Prove algebraically that the straight line with equation  $x - 2y = 10$  is a tangent to the circle with equation  $x^2 + y^2 = 20$

DO NOT WRITE IN THIS AREA

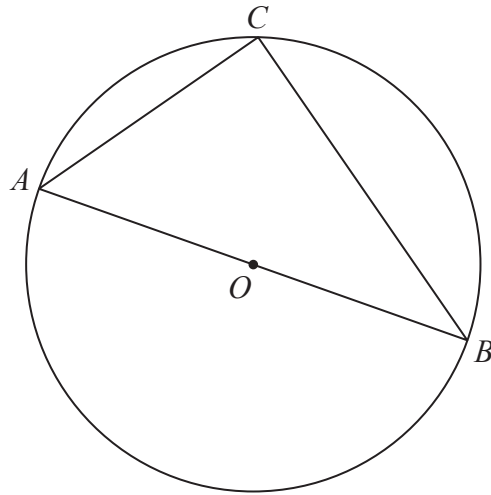
DO NOT WRITE IN THIS AREA

DO NOT WRITE IN THIS AREA

(Total for Question 19 is 5 marks)



20



$A$ ,  $B$  and  $C$  are points on the circumference of a circle, centre  $O$ .  
 $AOB$  is a diameter of the circle.

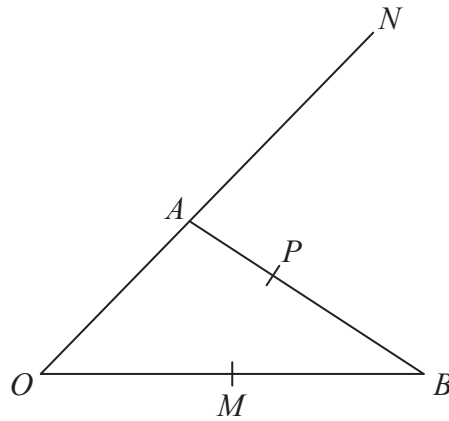
Prove that angle  $ACB$  is  $90^\circ$

You must **not** use any circle theorems in your proof.

(Total for Question 20 is 4 marks)



21



$OAN$ ,  $OMB$  and  $APB$  are straight lines.

$AN = 2OA$ .

$M$  is the midpoint of  $OB$ .

$\vec{OA} = \mathbf{a}$       $\vec{OB} = \mathbf{b}$

$\vec{AP} = k\vec{AB}$  where  $k$  is a scalar quantity.

Given that  $MPN$  is a straight line, find the value of  $k$ .

(Total for Question 21 is 5 marks)

TOTAL FOR PAPER IS 80 MARKS

