



Please write clearly in block capitals.

Centre number

Candidate number

Surname _____

Forename(s) _____

Candidate signature _____

GCSE MATHEMATICS

F

Foundation Tier Paper 1 Non-Calculator


Thursday 2 November 2017 Morning Time allowed: 1 hour 30 minutes

Materials

For this paper you must have:

- mathematical instruments

You must **not** use a calculator.



Instructions

- Use black ink or black ball-point pen. Draw diagrams in pencil.
- Answer **all** questions.
- You must answer the questions in the spaces provided. Do not write outside the box around each page or on blank pages.
- Do all rough work in this book. Cross through any work you do not want to be marked.

Information

- The marks for questions are shown in brackets.
- The maximum mark for this paper is 80.
- You may ask for more answer paper, graph paper and tracing paper. These must be tagged securely to this answer book.

Advice

- In all calculations, show clearly how you work out your answer.

For Examiner's Use	
Pages	Mark
2–3	
4–5	
6–7	
8–9	
10–11	
12–13	
14–15	
16–17	
18–19	
20–21	
22–23	
24–25	
26–27	
28–29	
TOTAL	



Answer **all** questions in the spaces provided

- 1** Circle the decimal which has the same value as $\frac{3}{5}$ **[1 mark]**

0.06

0.35

0.6

3.5

- 2** How many millimetres are there in 7.5 centimetres?
Circle your answer. **[1 mark]**

0.75

70.5

75

750

7500

- 3** Which of these shapes has two lines of symmetry?
Circle your answer. **[1 mark]**

Semicircle

Rhombus

Trapezium

Isosceles triangle



4 Circle the number that is 7 less than -12

[1 mark]

-19

-5

5

19

5 (a) Solve $x - 3 = 14$

[1 mark]

$$x = \underline{\hspace{10em}}$$

5 (b) Solve $5y = 45$

[1 mark]

$$y = \underline{\hspace{10em}}$$

5 (c) Solve $8 + w = 6$

[1 mark]

$$w = \underline{\hspace{10em}}$$

<hr/>
7

Turn over ►



6 (a) Work out $9174 \div 11$

[2 marks]

Answer _____

6 (b) Work out $\frac{5}{6} + \frac{3}{7}$

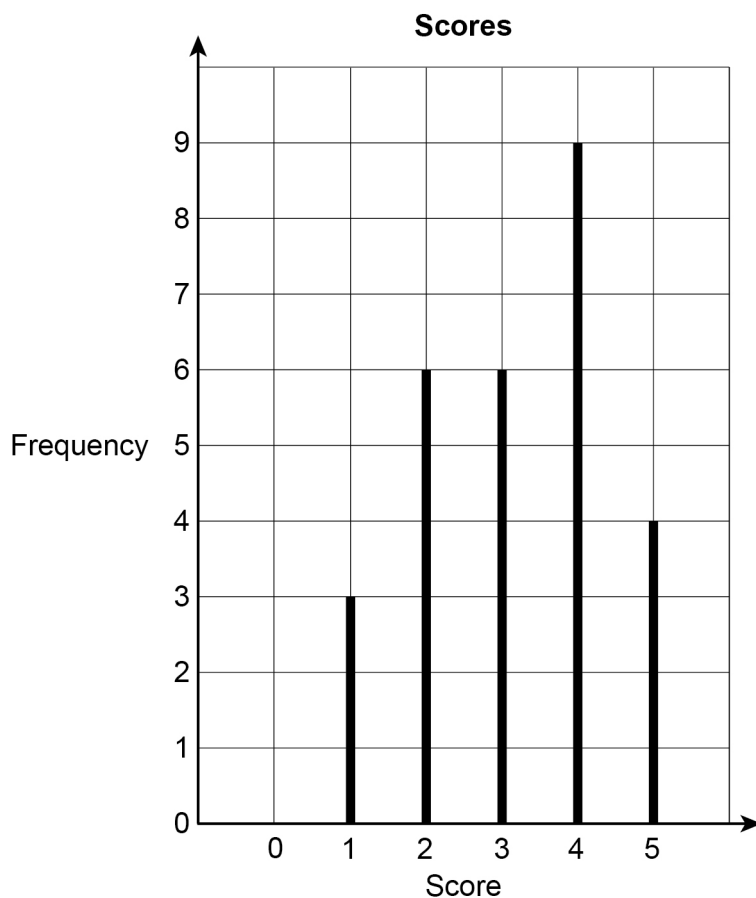
Give your answer as a mixed number.

[3 marks]

Answer _____



7 The diagram shows the scores given by judges during a television show.



7 (a) Which score was the mode?

[1 mark]

Answer _____

7 (b) There were 4 judges.
Each judge gave one score in each round.

How many rounds were there?

[3 marks]

Answer _____



8 A library book was due to be returned on 27 September.
It was actually returned on 14 October.
There is a fine of 8p for every day the book is late.

Work out the total fine.

[3 marks]

Answer £ _____



9 In a game, three stars are hidden at random.

Each star is behind a different square on this board.

	A	B	C	D	E
1					
2					
3					
4					
5					

9 (a) A square is chosen at random.

What is the probability that there is a star behind it?

[1 mark]

Answer _____

9 (b) In one game, the stars are behind three consecutive squares.

The squares are in one row or one column.

One of the squares is E2

Write down **all** the possible pairs for the other two squares.

[2 marks]

Answer _____



10

Complete the table to show equivalent fractions and percentages.

[3 marks]

Fraction	Percentage
$\frac{1}{2}$	50%
$\frac{3}{10}$	
	43%
$\frac{5}{2}$	



11 (a) Cards in a pack are red or blue in the ratio

$$\text{red : blue} = 2 : 3$$

What fraction of the cards are **red**?

Circle your answer.

[1 mark]

$$\frac{5}{6}$$

$$\frac{2}{3}$$

$$\frac{2}{5}$$

$$\frac{3}{5}$$

11 (b) A different pack has 72 cards.

$\frac{5}{9}$ are yellow.

Work out the number of yellow cards.

[2 marks]

Answer _____

Turn over for the next question



12 (a) How many edges are there on a square-based pyramid?

Circle your answer.

[1 mark]

4

5

8

12

12 (b) How many faces of a triangular prism are triangles?

Circle your answer.

[1 mark]

2

3

4

5

13 A bus can be early, on time or late.

The probability that the bus is early is 0.1

The probability that the bus is on time is 0.6

Work out the probability that the bus is late.

[2 marks]

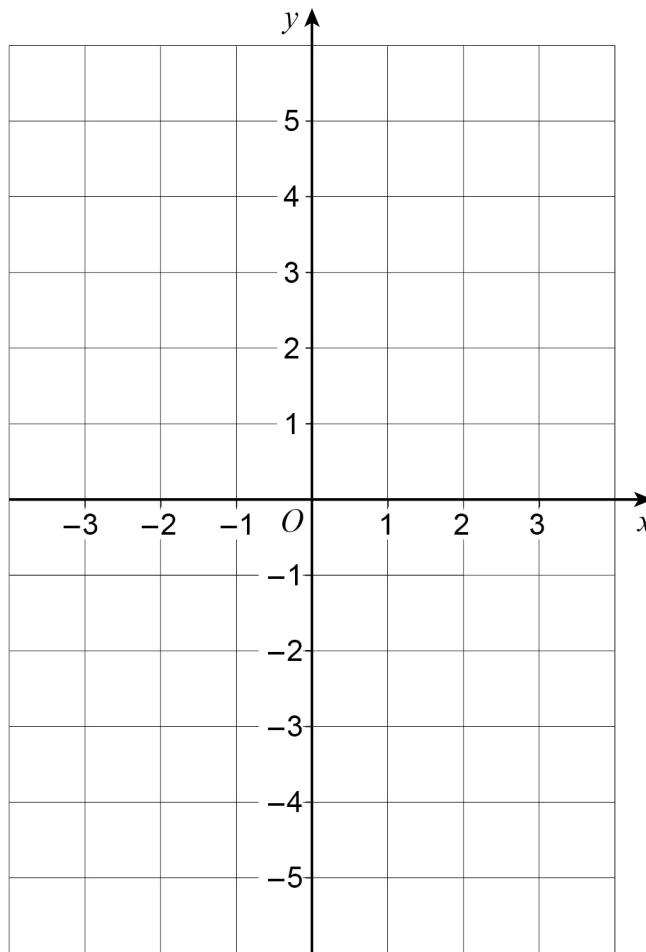
Answer _____



14

On the grid, draw the graph of $x + y = 2$ for values of x from -3 to 3

[2 marks]



Turn over for the next question



15

5% of a number is 31

1% of the same number is 6.2

Work out 13% of the number.

[3 marks]

Answer _____



16

Complete the grid so that when you

multiply the three numbers in any column, row or diagonal the answer is 1

[3 marks]

10		$\frac{1}{2}$
$\frac{1}{20}$		20
2	5	

Turn over for the next question**Turn over ►**

17 A sequence has three terms.

The term-to-term rule for the sequence is

multiply by 8 and then add 11

17 (a) The first term of the sequence is -1

Work out the third term.

[2 marks]

Answer _____

17 (b) The order of the three terms is reversed to make a new sequence.

Work out the term-to-term rule for this sequence.

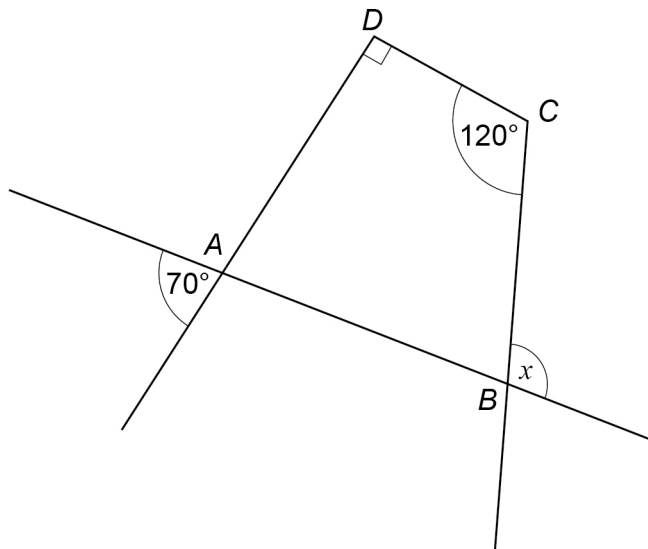
[1 mark]

Answer _____



18

$ABCD$ is a quadrilateral.
Sides are extended as shown.



Not drawn
accurately

Show that $x = 100^\circ$

[3 marks]

Turn over for the next question



19 Use 2 gallons = 9 litres to convert 17 gallons into litres.

[3 marks]

Answer _____ litres



20 n is an odd number.

p is a prime number.

In each part write down possible values of n and p so that

20 (a) $n + p$ is a square number.

[1 mark]

$n =$ _____ $p =$ _____

20 (b) np is a square number.

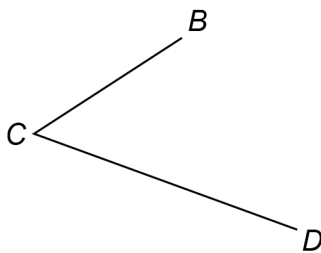
[1 mark]

$n =$ _____ $p =$ _____

Turn over for the next question



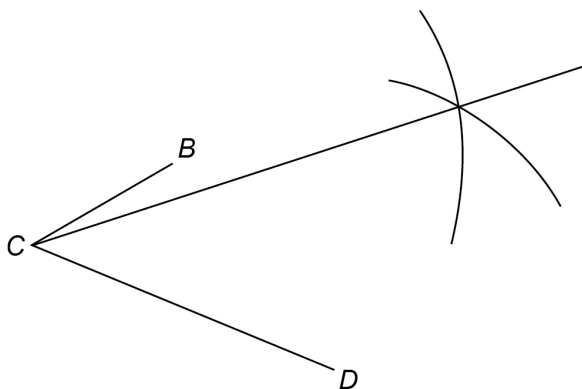
21 (a) Joe wants to bisect angle BCD .



Here is his method.

Use a pair of compasses to draw arcs of the same radius from B and D .

Draw a straight line from C through the intersection of the arcs.



Write down the error in his method.

[1 mark]



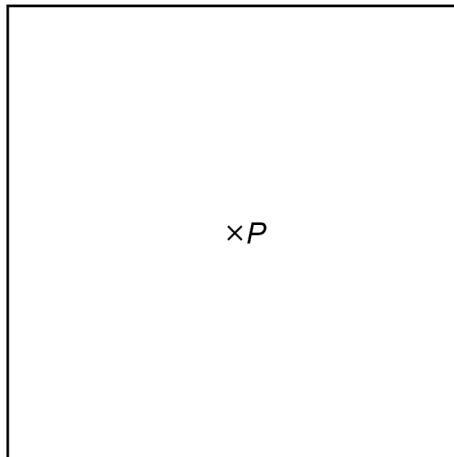
21 (b) Kay wants to show all the points 3 km from point P .

Scale: 1 cm represents 1 km

$\times P$

Here is her answer.

Scale: 1 cm represents 1 km



What is wrong with her answer?

[1 mark]

Question 21 continues on the next page



21 (c) Here is a rectangle.



Using a pair of compasses and a straight edge, construct **one** line of symmetry.
Show clearly your construction arcs.

[2 marks]



22

$$x : y = 7 : 4$$

$$x + y = 88$$

Work out the value of $x - y$

[3 marks]

Answer _____

Turn over for the next question



23

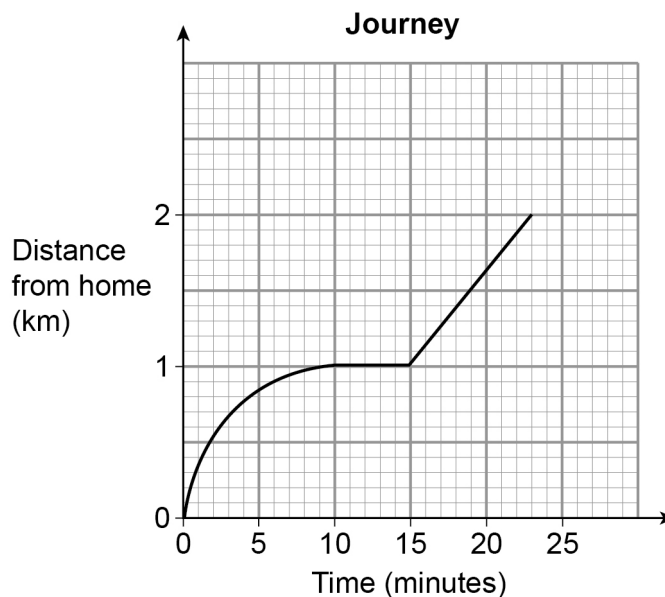
Anil's home is 1 km from a shop.

He walked from home to the shop at a constant speed in 10 minutes.

He stayed at the shop for 5 minutes.

He walked home at a constant speed in 8 minutes.

Anil drew this distance-time graph to represent his journey.



Make **two** criticisms of his graph.

[2 marks]

Criticism 1 _____

Criticism 2 _____



24 Three **whole** numbers are each rounded to the nearest 10

The sum of the rounded numbers is 70

Work out the **maximum** possible sum for the original three numbers.

[2 marks]

Answer _____

25 Circle the expression for the range of n consecutive integers.

[1 mark]

$$\frac{n+1}{2}$$

$$n-1$$

$$n$$

$$n+1$$

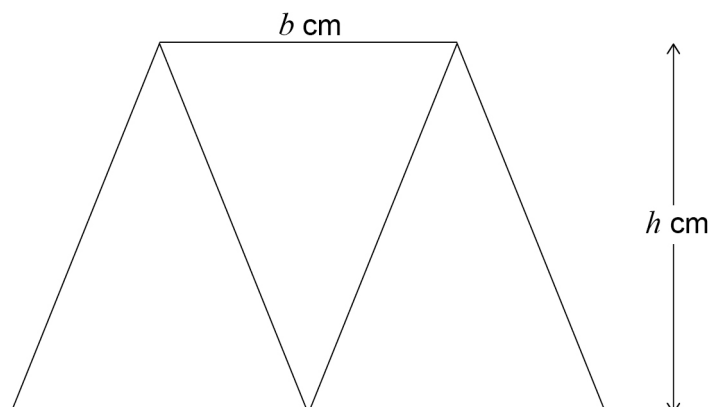
Turn over for the next question



26

Three identical isosceles triangles are joined to make this trapezium.

Each triangle has base b cm and perpendicular height h cm



26 (a)

Work out an expression, in terms of b and h , for the area of the trapezium.

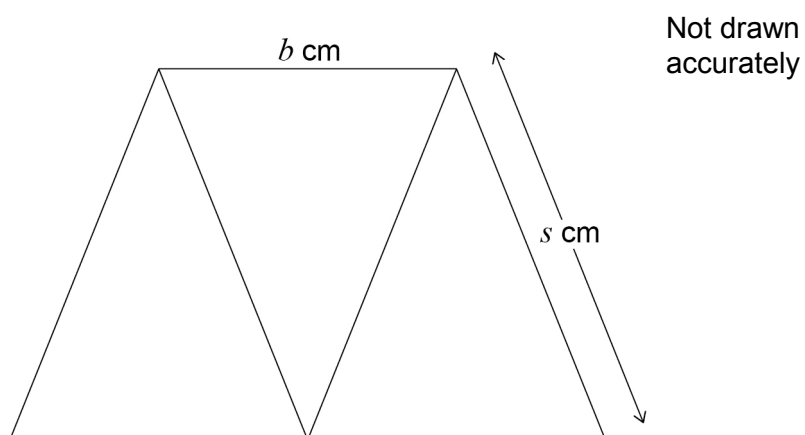
Give your answer in its simplest form.

[2 marks]

Answer _____ cm^2



26 (b) This diagram shows the same trapezium.



$$b : s = 2 : 3$$

Work out an expression, in terms of b , for the perimeter of the trapezium.

[2 marks]

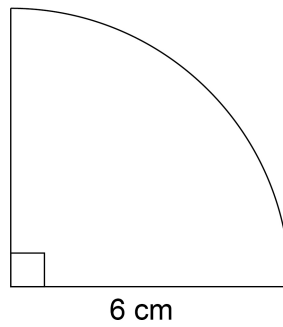
Answer _____ cm

Turn over for the next question



27

Here is a quarter circle of radius 6 cm

Not drawn
accurately

Work out the area of the quarter circle.

Give your answer in terms of π .**[2 marks]**

Answer _____ cm^2 

28 (a) Write in standard form 12 500

[1 mark]

Answer _____

28 (b) Write as an ordinary number 3.4×10^{-2}

[1 mark]

Answer _____

29 Work out the value of $(\sqrt{3})^2 \times (\sqrt{2})^2$

[2 marks]

Answer _____

Turn over for the next question

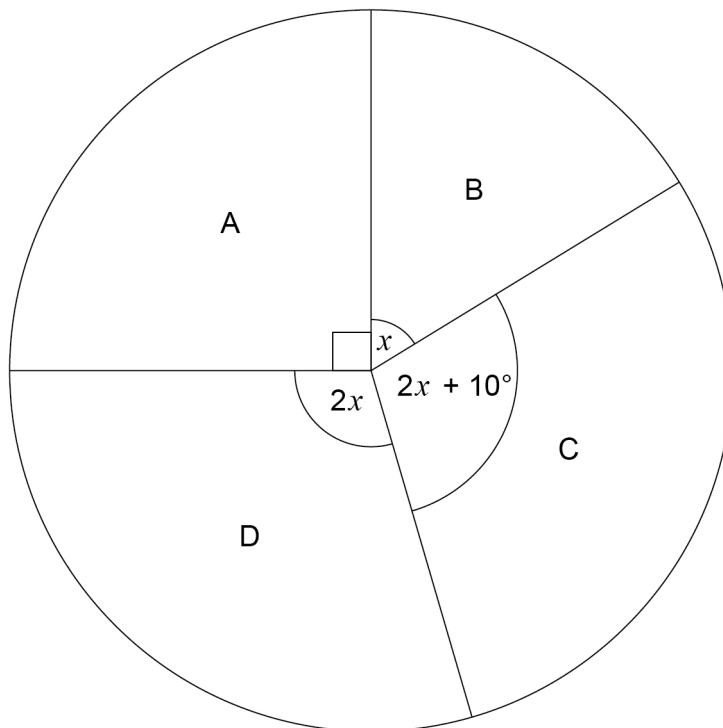


30

The four candidates in an election were A, B, C and D.
The pie chart shows the proportion of votes for each candidate.

Proportion of votes

Not drawn
accurately



Work out the probability that a person who voted, chosen at random, voted for C.

[4 marks]

Answer _____



31 (a) Factorise $x^2 - 100$

[1 mark]

Answer _____

31 (b) Solve $7x + 6 > 1 + 2x$

[2 marks]

Answer _____

END OF QUESTIONS

7



There are no questions printed on this page

**DO NOT WRITE ON THIS PAGE
ANSWER IN THE SPACES PROVIDED**



There are no questions printed on this page

**DO NOT WRITE ON THIS PAGE
ANSWER IN THE SPACES PROVIDED**



There are no questions printed on this page

**DO NOT WRITE ON THIS PAGE
ANSWER IN THE SPACES PROVIDED**

Copyright Information

For confidentiality purposes, from the November 2015 examination series, acknowledgements of third party copyright material will be published in a separate booklet rather than including them on the examination paper or support materials. This booklet is published after each examination series and is available for free download from www.aqa.org.uk after the live examination series.

Permission to reproduce all copyright material has been applied for. In some cases, efforts to contact copyright-holders may have been unsuccessful and AQA will be happy to rectify any omissions of acknowledgements. If you have any queries please contact the Copyright Team, AQA, Stag Hill House, Guildford, GU2 7XJ.

Copyright © 2017 AQA and its licensors. All rights reserved.

